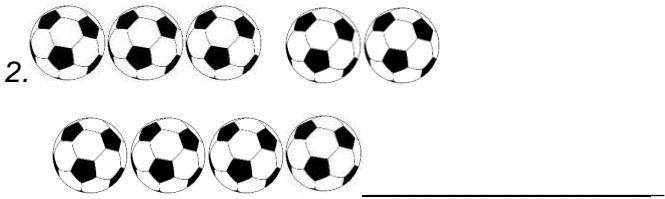


**MATHEMATICSACTIVITIES**

**TIME:** \_\_\_\_\_

NAME: \_\_\_\_\_

**Countandwrite**



**Writeinfigures**

3. Twentyone \_\_\_\_\_

4. Fifteen \_\_\_\_\_

5. Thirtythree \_\_\_\_\_

6. 37 \_\_\_\_\_ tens and \_\_\_\_\_ ones

7. 89 \_\_\_\_\_ tens and \_\_\_\_\_ ones

8.  $8+3+2=$  \_\_\_\_\_

9.  $5+7+1=$  \_\_\_\_\_

10.  $6+3+5=$   
\_\_\_\_\_

**Filinthemissingnumbers**

11. 3,4,5, \_\_\_\_\_

12. 13,15,17, \_\_\_\_\_

**Writeinwords**

7-Seven

13. 4 \_\_\_\_\_

14. 5 \_\_\_\_\_

15. 3 \_\_\_\_\_

16. **Add** 12

+ 6  
\_\_\_\_\_

17. \_\_\_\_\_  
14

+ 4

18.  $17 - 3 =$  \_\_\_\_\_

27.  $50$

+40

19.  $25 - 4 =$  \_\_\_\_\_

20. What is 13 take away 8? **Subtract**

28.  $9$

-6

21.  = 85

22.  = 49

23. Jum had 7 oranges. He gave John 3 oranges. How many oranges was he left with?

29.  $8$

-2

24. Tracy was given 5 oranges, 6 mangoes and 4 bananas. How many fruits did he have altogether?


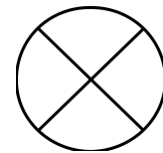
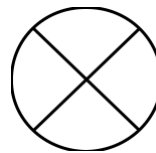
30. Name the position

25. **subtraction and addition**

$13 - 6 =$

$6 +$    $= 13$

**Workout**



26.  $10$

+70