


EDU SERIES
GRADE2YEAR2021

MATHEMATICS ACTIVITIES

TIME: _____

NAME:

1. Count and write the number.



$$9.70 - 50 \boxed{}$$

$$\underline{\hspace{2cm}} - 10.19 - \boxed{} = 12$$

2. 25 is ___ hundreds ___ tens and ___ ones.

3. 100 is ___ hundred ___ tens and ___ ones.

11. Daniel planted 19 lemon trees last week.
He planted 24 lemon trees this week.
How many trees has Daniel planted altogether

Write the numbers in words

4. 9 _____

5. 15 _____

$$12. \begin{array}{r} 28 \\ +29 \\ \hline \end{array}$$

$$+29$$

$$13. \begin{array}{r} 37 \\ +6 \\ \hline \end{array}$$

$$+6$$

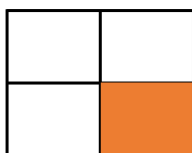

$$14. 4 + 6 + \boxed{}$$

Fill in the missing number

6. 24, 26, 28, 30, _____, 34

7. 85, 80, 75, 70, _____, 60

8. Which one is a quarter



A

B

15. Which one holds more





A

B

24.

$8 \div 4 =$


25. Ruth shared 15 bananas equally among 3 children. How many bananas did each child get

16. Draw an oval shape

17. $5 \times 7 =$

18. 10×4

26. Which one is heavier?



A

19. Ben has 5 pencils. He gave Peter 2 pencils. How many pencils was Ben left with?

20.

2

21. Draw a rectangle


22. September has how many days

23.

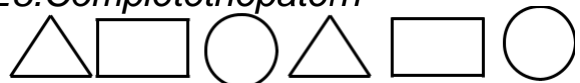
-

=20

27. What is the time?



28. Complete the pattern



29.

20

30. There are _____ in a year.

31. 0 hundreds 9 tens and 7 ones is

32. 4 hundreds 2 tens and 5 ones is

33. Helen bought a school bag at Sh. 70.
Joash bought the same type of bag at Sh.
90. How much money did Helen save?
