

COMPETENCY BASED CURRICULUM

GRADE 4

MATHEMATICAL ACTIVITIES

④

Time : 2 Hours

Name _____

Learners Number

--	--	--	--	--

Gender Boy Girl

County Name _____ County code

--	--	--

Sub -County Name _____ Sub-county code

--	--	--	--

School Name _____ School code

--	--	--	--

ASSESSMENT RUBRICS

The teacher to fill the grid below after marking the learner's work.

	Exceeds expectation	Meets expectation	Approaching expectation	Below expectation
Numbers (1-17)				
Measurement (18 - 29)				
Geometry (30-33)				

NUMBERS

1. $\square + 20 = 45$

2. Write in words
420 _____

3. Fill in the missing numbers

2, 4, 6, 8, _____

4. 45 days = _____ weeks _____ days.

5. A farmer had 999 cows. He bought 9 more. How many cows did he have altogether?

6. A half of 32 = _____

7. Take away 99 from 1000.

8. Add

$$\begin{array}{r} 6161 \\ +3824 \\ \hline \\ \hline \end{array}$$

9.
$$\begin{array}{r} 684 \\ -351 \\ \hline \\ \hline \end{array}$$

10. $\frac{5}{8} - \frac{2}{8} =$

11. _____ $\div 9 = 7$

12. $\frac{2}{4} + \frac{1}{4} =$

13. $9 \times 4 \times 0 =$ _____

14. What is the next number in the pattern.

1, 3, 5, 7, _____

15. What is $400 - 132$

16.
$$\begin{array}{r} 48 \\ +\square6 \\ \hline 84 \\ \hline \end{array}$$

17. $\frac{1}{7}$ of 56

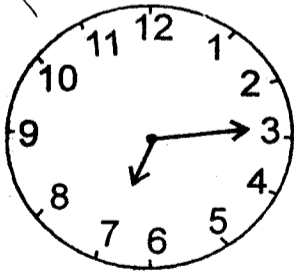


MEASUREMENT

18.

Weeks	days
6	1
- 3	4
<hr/>	
<hr/>	

19. What time is shown below, if it is in the morning.

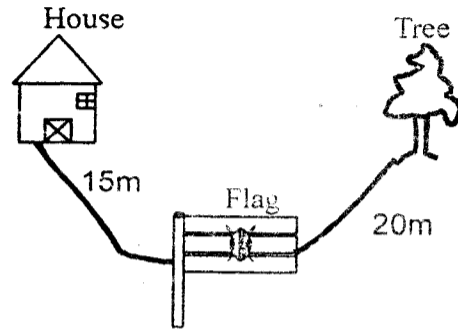


20. Mwema bought 18 hens. He gave an equal number of the hens to his six children. How many hens did each child get?

(24, 12, 3)

21. Which is the eleventh month of the year? _____

22. Kepha walked from the house to the tree





What is the distance that he walk.

23. A rope was cut into 2 pieces, which were given to two boys. Kimaru was given 43 metres and Kome was given 15 metres. How long was the rope?

(58, 28, 60)

24. How many litres do the following containers hold altogether?





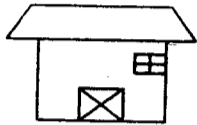
25. Njogu took 4 hours 30 minutes to drive from Kericho to Nairobi. He also took 1 hour 20 minutes to move from Nairobi to Karatina. How long was the whole journey?

(5 hrs 50 mins, 3hrs 10 min, 6hrs 50min)

26. Which of the following are not needs?



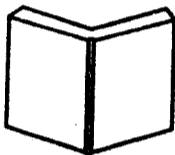
Car



House



Trouser



Book

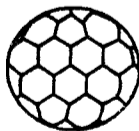
_____ and _____

Use the figure below for questions 27 and 28.

belt
sh. 85



ball
sh. 150



short
sh. 175



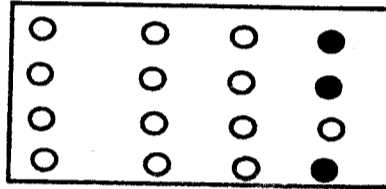
27. Juma bought a pair of shorts and a belt. How much did he pay?

28. Mohammed had sh. 500. He bought a ball. How much balance did he get?
(Sh 350, Sh 650, Sh 450)

29.
$$\begin{array}{r} 213 \text{ metres} \\ + 107 \text{ metres} \\ \hline \end{array}$$

GEOMETRY

30. What part of the whole is shaded?



31. Name this figure



32. Complete the pattern below.



33. How many triangles are there?

