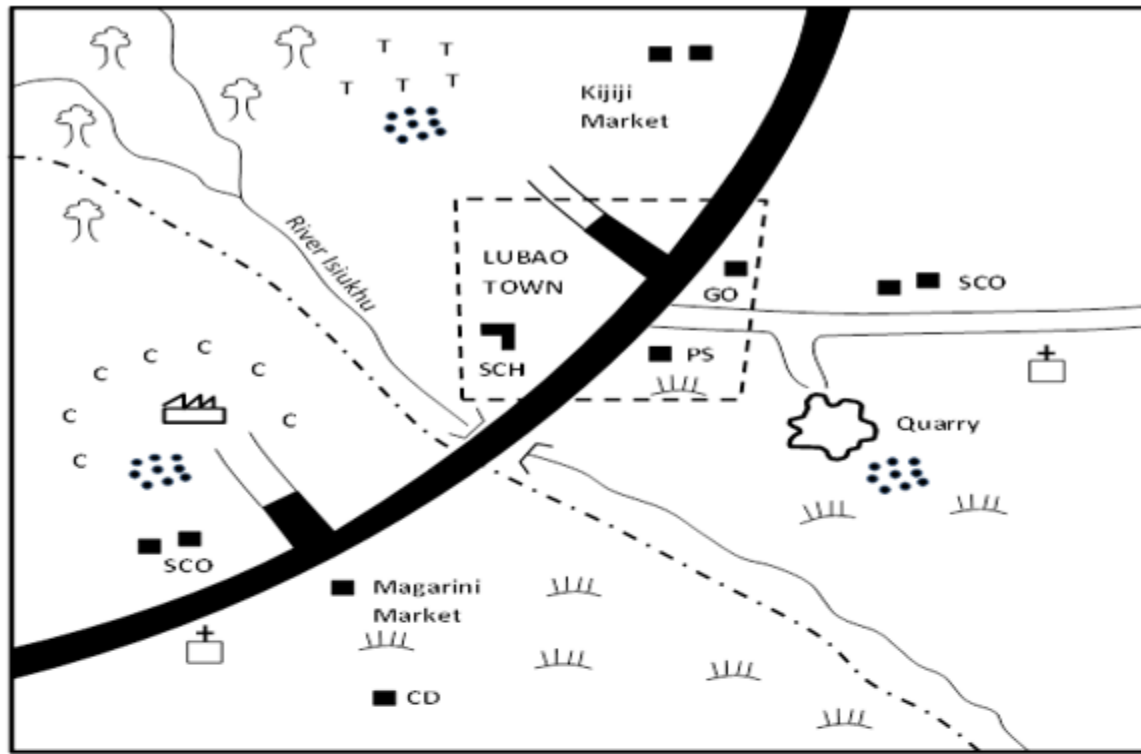


**EDU SERIES EXAM**  
**SOCIAL STUDIES & CRE STD 6**

# SOCIAL STUDIES & CRE STD 6

TIME: 2HRS 15MINS

## LUBAO AREA



Scale 0 1 2 3 4 5 6 7 8 9 KM

### KEY

	Permanent building		River & bridge		School		CD	Cattle dip
	Scrub		Factory		Sub-county boundary		PS	Police station
	Tarmac road		Forest		Tea		GO.	Governor's office
	Murram road		Settlements		Coffee		+	Church

### Use the map of Lubao Area below to answer questions 1-7.

- River Isiukhu flows towards the \_\_\_\_  
 A. South West      B. North East  
 C. South East      D. North West
- Which of the following social service facility does Lubao area urgently need?  
 A. School      B. Police station  
 C. Church      D. Hospital

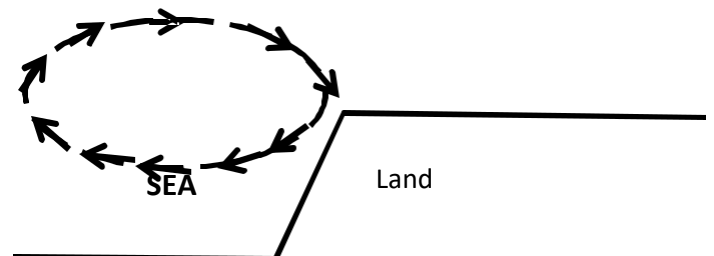
- The climate of the Southern part of Lubao area is \_\_\_\_  
 A. Hot and wet      B. Hot and dry  
 C. Cool and wet      D. Cool and dry
- Lubao area is likely to be a \_\_\_\_  
 A. Sub-county      B. County  
 C. Country      D. Location
- The factory in the map is likely to process \_\_\_\_  
 A. Coffee      B. Tea  
 C. Pyrethrum      D. Beef

6. Apart from coffee and tea, which other crop can also do well in the North Western part of Lubao area?  
 A. Sugarcane                      B. Bananas  
 C. Maize                              D. Pyrethrum
7. The type of settlement in Lubao area has been influenced by \_\_\_\_  
 A. Economic activities              B. Transport  
 C. Climate                              D. Drainage
8. (i) Abagusii (ii)Aembu (iii)Pokomo  
 The communities listed above are \_\_\_\_  
 A. Bantus                              B. Cushites  
 C. Semites                              D. Nilotes
9. Below are responsibilities of children except one. Which one is it?  
 A. Taking care of family property  
 B. Respecting other people  
 C. Serving the community  
 D. Providing food for the family.
10. A programme of activities that have been planned to take place every day in the school is known as \_\_\_\_  
 A. A school's daily plan  
 B. A school routine  
 C. A school calendar  
 D. A duty roster.
11. The block mountain found at the boarder of Uganda and the Democratic Republic of Congo is \_\_\_\_  
 A. Mt. Nyiragongo              B. Mt. Elgon  
 C. Mt. Kilimanjaro              D. Mt. Ruwenzori
12. The North Eastern part of Kenya is sparsely populated because \_\_\_\_  
 A. The area is cold  
 B. The area has many wild animals  
 C. The area receives unreliable rainfall  
 D. The area has a thick forest
13. Which one of the following countries in Eastern Africa is correctly matched with its capital city?  
 A. Somalia – Mogadishu  
 B. Tanzania – Addis Ababa  
 C. Ethiopia – Khartoum  
 D. Sudan – Dodoma
14. General elections in Kenya are held every \_  
 A. 2 years                              B. 4 years  
 C. 5 years                              D. 10 years
15. Which one of the following lakes are fresh water lakes only?  
 A. Tanganyika, Naivasha, Baringo  
 B. Natron, Bogoria, Elementaita  
 C. Abaya, Magadi, Nakuru

- D. Rukwa, Bogoria, Eyasi
16. The main tourist attraction in Eastern Africa is \_\_\_\_  
 A. Sandy beaches              B. Wildlife  
 C. Historical sites              D. Warm climate
17. Below are characteristics of a type of climate in Eastern Africa.  
 (i) It has two rainy seasons.  
 (ii) It has a high mean annual temperature.  
 (iii) Rainfall is between 800mm and 1100mm per year.  
 The climate described is \_\_\_\_  
 A. Subtropical climate  
 B. Equatorial climate  
 C. Tropical climate  
 D. Coastal tropical climate.
18. Which of the vegetation types is found only in coastal areas?  
 A. Papyrus vegetation  
 B. Mangrove vegetation  
 C. Tropical rain forest vegetation  
 D. Savannah vegetation.
19. Complete the blank box

Keiyo	Nandi	Sabaot	
-------	-------	--------	--

- A. Kipsigis                              B. Anuak  
 C. Maasai                              D. Karamajong
20. The diagram below represents the formation of \_\_\_\_



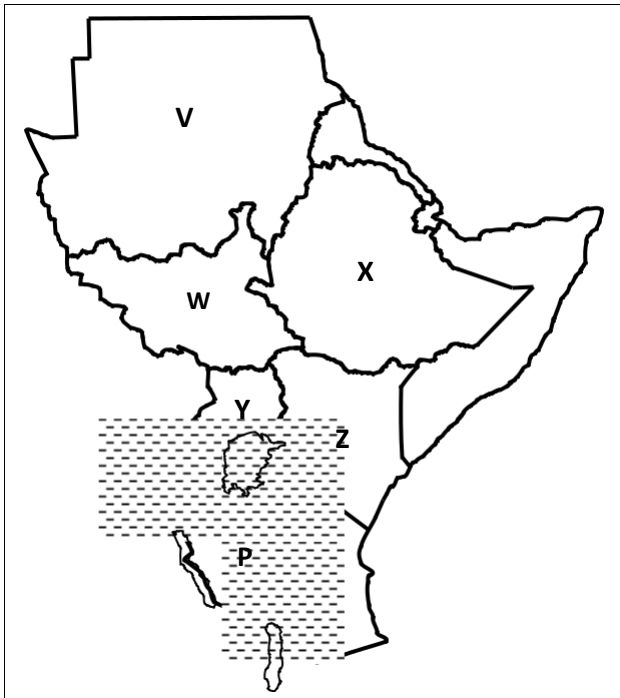
- A. Convictional rainfall              B. Land breeze  
 C. Water breeze                      D. Sea breeze
21. The above occurs during the \_\_\_\_  
 A. Day                                      B. Summer  
 C. Night                                      D. Winter
22. Wakiaga, is a talented football player. He is offered citizenship by the South African government so he can play for its national team but he refuses. What does this action say about Wakiaga?  
 A. He is selfish  
 B. He is patriotic to his country  
 C. He hates South Africa.  
 D. He is not wise.

23. The main problem facing towns in Eastern Africa is \_\_\_\_  
 A. Unemployment B. Street families C. Traffic jams D. Shortage of water
24. Which of the following are electronic means of communication.  
 A. Radio and newspapers  
 B. Newspapers and magazines  
 C. Cellphones and newspapers  
 D. Radio and television
25. The main problem facing trade among countries of Eastern Africa is  
 A. Lack of a common currency  
 B. Poor means of transport  
 C. Political instability  
 D. Production of similar goods
26. Marine fishing in Kenya is carried out in \_\_\_\_  
 A. Lake Victoria B. Lake Tanganyika  
 C. The Indian Ocean D. Lake Turkana
27. The following are needs of a family.  
 (i) Education (ii) Shelter  
 (iii) Love (iv) family property  
 (v) Security (vi). Water

Which one of the following combinations consists of secondary needs only

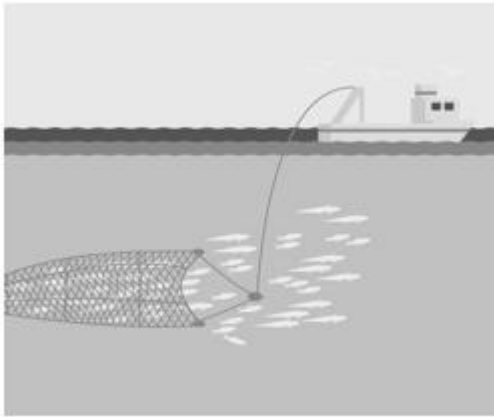
- A. (i) (ii) (iv) (v) B. (ii) (iii) (iv) (v)  
 C. (i) (ii) (v) (vi) D. (i) (iii) (iv) (v)

**Use the map of Eastern Africa below to answer questions 28 to 31**



28. Which one of the following statements is true about the lake marked P?  
 A. It is a fresh water lake  
 B. It is found on the floor of the Rift Valley.  
 C. it is shared by two countries  
 D. it is a marine fishing ground.
29. Which one of the following countries marked V,W,X,Y is the youngest in Eastern Africa?  
 A. V B. X C. W D. Y
30. The country marked Z was colonized by the  
 A. Italians B. British  
 C. French D. Germans
31. The staple food for the people of the country marked Y is \_\_\_\_  
 A. Maize B. Potatoes  
 C. Rice D. Bananas
32. Which one of the following is the best way of transporting petroleum from Mombasa to Kisumu?  
 A. Pipeline B. Air  
 C. Rice D. Water
33. Kenya's main inland port is \_\_\_\_  
 A. Mombasa B. Nakuru  
 C. Kisumu D. Eldoret
34. Which of the following pairs of communities were ruled by kings before the coming of the Europeans?  
 A. Baganda and Ameru  
 B. Abawanga and Baganda  
 C. Nyamwezi and Abawanga  
 D. Baganda and Nyamwezi
35. Three of the following are duties of a good citizen. Which one is not?  
 A. Arresting people who do not obey the law  
 B. Respecting those in authority  
 C. Being loyal and ready to defend one's country.  
 D. Paying taxes to the government.
36. The first action to take when you find a child who has been raped is to  
 A. Take the child to the hospital  
 B. Tell the child not to tell anybody  
 C. Inform the headteacher.  
 D. Inform the chief.
37. Which one of the following conditions may lead to lawlessness in society?  
 A. Unemployment among the youth  
 B. Availability of food in the family  
 C. Free primary and secondary education  
 D. Adequate housing facilities.
38. Who among the following is not a member of the county Assembly.  
 A. Elected members of the County Assembly

- B. A Member Representing the Youth
  - C. The Speaker
  - D. The Deputy Governor
39. The best way of encouraging people in Kenya to obey the law is by \_\_\_\_
- A. Employing more police officers to enforce the law.
  - B. Keeping the law breakers in prison.
  - C. Rewarding people who obey the law
  - D. Educating people on the importance of obeying the law.
40. Which one of the following is not a service industry?
- A. Banking
  - B. Insurance
  - C. Pottery
  - D. Tourism
41. Cultural artefacts are important mainly because \_\_\_\_
- A. They were made in the past.
  - B. They attract tourists
  - C. They tell the history of a community
  - D. They were made by special people.
42. The method of fishing shown in the diagram below is called \_\_\_\_

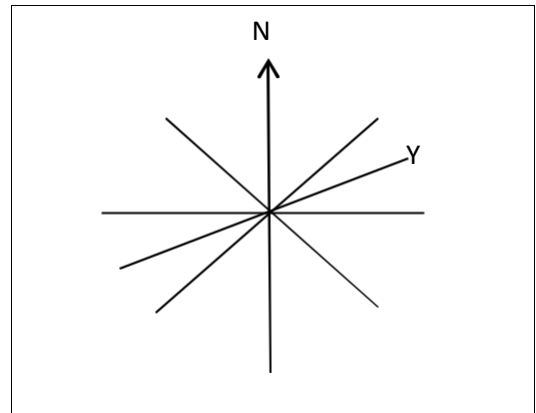


- A. Net drifting
  - B. Purse Seining
  - C. Trawling
  - D. Long lining
43. Josephine, a standard six girl has been asked by her mother to look after the baby on Friday. Which right has Josephine been denied?
- A. Right to leisure
  - B. Right to education
  - C. Right to basic needs
  - D. Right to earn a living
44. The following activities took place in a society.
- (i) Participation in games and sports
  - (ii) Employing people from one community

- (iii) Sharing resources equitably
  - (iv) Participating in cattle rustling
- Which one of the following combinations of activities may undermine peace in the society?

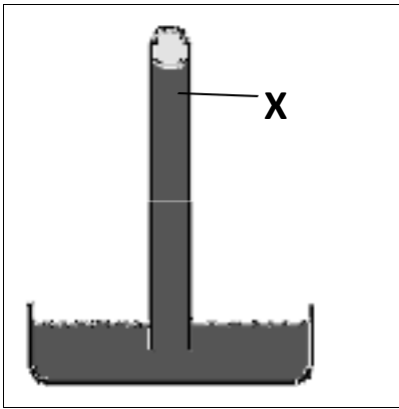
- A. (i), (ii)
  - B. (i), (iii)
  - C. (ii), (iii)
  - D. (ii), (iv)
45. The following are arms of the government except \_
- A. County Assembly
  - B. Judiciary
  - C. Legislature
  - D. Executive
46. The best way of conserving forest in Kenya is by \_\_\_\_
- A. Educating people on the importance of forests
  - B. Employing more wardens to take care of forests
  - C. Banning charcoal burning
  - D. Fencing forested areas

47. Use the diagram below to answer question



- The point marked Y is \_\_\_\_
- A. North North East
  - B. North North West
  - C. East North East
  - D. West North West.
48. Which one of the following features is the odd one out?
- A. River
  - B. Plateau
  - C. Swamp
  - D. Lake
49. Which one of the following factors has mainly influenced population distribution in the Miombo Woodlands of Tanzania?
- A. Climate
  - B. Drainage
  - C. Pests and diseases
  - D. Relief

50. Use the diagram below to answer questions 50 to 52.



The diagram above shows.

- A. A rain gauge
  - B. A thermometer
  - C. A liquid barometer
  - D. An anemometer
51. The liquid marked X is \_\_\_\_
- A. Mercury
  - B. Alcohol
  - C. Water
  - D. Kerosene
52. The instrument is used to measure \_\_\_\_
- A. Temperature
  - B. Wind speed
  - C. Rainfall
  - D. Air pressure
53. Black cotton soils are suitable for irrigation because \_\_\_\_
- A. They are found in flat areas.
  - B. They are easy to plough
  - C. They do not allow water to pass through easily
  - D. They are fertile and do not need manure.
54. Which one of the following colours of the National flag of Kenya is wrongly matched with its meaning?
- A. Black – the colour of our soil
  - B. White – peace
  - C. Green – our agricultural productivity
  - D. Red – blood shed during the struggle for independence.
55. The current cabinet secretary for Education is called \_\_\_\_
- A. Amina Mohammed
  - B. Fred Matiang'i
  - C. William Ruto
  - D. George Magoha
56. Which one of the following is not a National holiday celebrated in Kenya?
- A. Labour Day
  - B. Jamhuri Day
  - C. Mashujaa Day
  - D. Madaraka Day
57. Which one among the following is not among the Big five?
- A. Lion
  - B. Giraffe

- C. Leopard
  - D. Elephant
58. The head of the Judiciary in Kenya is the \_\_\_\_
- A. President
  - B. Attorney General
  - C. Speaker
  - D. Chief Justice
59. Kenya is divided into \_\_\_\_ counties.
- A. 47
  - B. 350
  - C. 290
  - D. 68
60. The smallest country in Eastern Africa is \_\_\_\_
- A. Eritrea
  - B. Djibouti
  - C. Kenya
  - D. Tanzania
61. From the book of Genesis, the following statements are true except?
- A. God created man from soil
  - B. Human beings were created last.
  - C. Man was created from woman's rib
  - D. Human beings are in-charge of all the creation.
62. Why did Adam and Eve hide after eating the fruit from the tree of knowledge?
- A. They were afraid of God.
  - B. They did not want to be punished.
  - C. They feared Satan.
  - D. They had no clothes.
63. Which sign did God give Noah after the floods?
- A. Sunshine
  - B. Rainbow
  - C. Ark
  - D. Rainfall
64. Abraham experienced new life after he;-
- A. Married Hagar
  - B. Was baptized
  - C. Left Caanan to Haran
  - D. Left Haran to Caanan
65. Where was Moses living when God called him?
- A. Egypt
  - B. Israel
  - C. Midian
  - D. Jerusalem
66. Why did the Israelites celebrate the Passover annually?
- A. To remember their deliverance from Egypt
  - B. To praise God
  - C. To remember life in the wilderness
  - D. To appreciate the life in Egypt
67. Who was the first king of Israel?
- A. David
  - B. Saul
  - C. Ahab
  - D. Solomon
68. Who was led by the Holy spirit to defeat the midianites with 300 soldiers.
- A. Samson
  - B. David
  - C. Gideon
  - D. Saul
69. King Ahab broke three of the following commandments. Which one did he NOT?
- A. Do not murder
  - B. Do not steal

- C. Do not accuse falsely  
D. Do not covet
70. According to Jesus, the kingdom of God belongs to those who are \_\_\_\_  
A. Innocent and humble like children  
B. Rich  
C. Murders  
D. Proud and knowledgeable like the Pharisees
71. Jesus was a refugee in \_\_\_\_  
A. Nazareth                      B. Bethlehem  
C. Bethany                        D. Egypt
72. Who among the following were led by a star to see baby Jesus?  
A. Wise men                      B. Shepherds  
C. Angels                         D. Elders
73. Which one of the following is not a fruit of the Holy Spirit?  
A. Faithfulness                  B. Faith  
C. Love                             D. Joy
74. "Whoever refuses to work is not allowed to eat" who said these.  
A. Paul B. Peter C. James D. Jesus
75. Which commandment has a promise?  
A. Keep the Sabbath Holy  
B. Do not covet  
C. Do not steal  
D. Respect your father and mother.
76. The first Christian Martyr of the early church was \_\_\_\_  
A. Timon                         B. Philip  
C. Stephen                       D. Nicanos
77. Which one does not refer to the Holy communion?  
A. The Holy mass  
B. Eucharist  
C. The breaking of the bread  
D. Pentecost
78. Three of the following are skills of knowing and living with oneself. Which one is not.  
A. Critical thinking  
B. Coping with emotions  
C. Self – awareness  
D. Coping with stress
79. Why was the servant in the parable of the talents punished?  
A. He was lazy  
B. He did not make use of his talent  
C. He was jealous of other servants  
D. He insulted his master
80. The man healed by Peter and John at the Beautiful Gate in Jerusalem was:-  
A. Mentally handicapped  
B. Visually handicapped  
C. Physically handicapped  
D. Hearing impaired
81. What was the name of the pool to which Jesus sent the blind to wash his face?  
A. Gadara                         B. Lake Galilee  
C. Jordan                         D. Siloam
82. Early believers were first called Christians at  
A. Antioch                         B. Jerusalem  
C. Bethlehem                     D. Jericho
83. The last book in the old testament is-  
A. Genesis                         B. Malachi  
C. Mathew                         D. Revelation
84. The Ethiopian Eunuch was helped to understand the scripture by \_\_\_\_  
A. Simon                         B. Jeremiah  
C. Philip                         D. A priest
85. Which one of the following specialists is found in both Christianity and traditional African society?  
A. Witches                         B. Rainmakers  
C. Sorcerers                       D. Prophets
86. In traditional African society, wealth was measured through all the following EXCEPT?  
A. Number of cars  
B. Number of children  
C. Size of granary  
D. Size of land
87. Which one of the following should a Christian do during leisure?  
A. Watching cartoons  
B. Visiting prisoners  
C. Reading the Bible  
D. Watching Christian movies
88. Why should we obey our parents  
A. To be understood  
B. To earn favour  
C. Because it pleases God  
D. To get money from them.
89. Why should Christians work?  
A. To be rich  
B. To earn more money  
C. Because they are forced  
D. Because God is a worker.
90. Who was the first missionary to translate the bible into Kiswahili.  
A. Ludwig Krapf  
B. Johanne Rebman  
C. Edward Erhardt  
D. Dr. David Livingstone