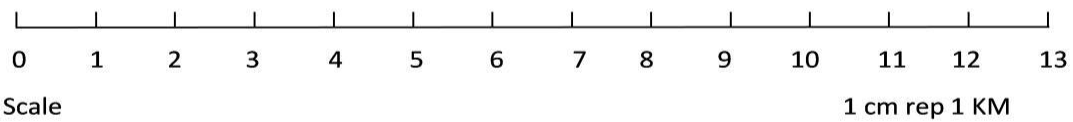
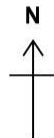
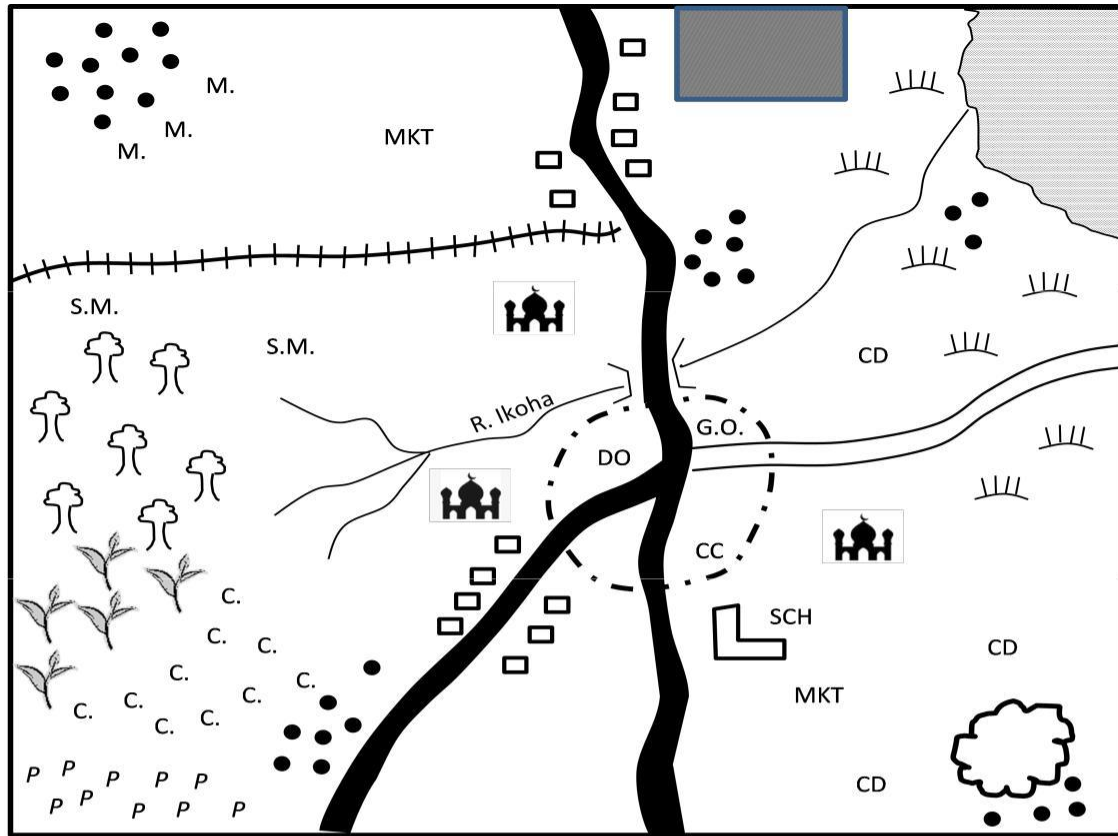


EDU SERIES 2021

SOCIAL STUDIES/CRE STD FIVE (5) Time : 1 hr 40 Mins



KEY



Forest

p p p Pyrethrum

G.O. Governor

Permanent building



Tarmac road

MM Maize

D.O. District officer

River & Bridge



Murrum road

•• Huts

C.C. Chief's camp



Railway line

Quarry

School

Game Park

Tea

Scrub

MKT. Market

C. C. C. Coffee

Mosque

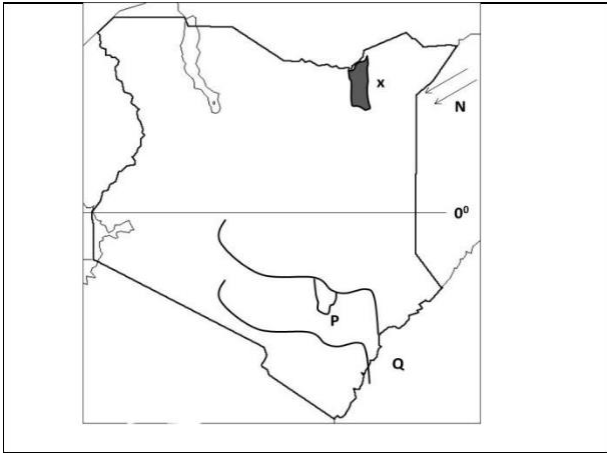
C.D. Cattle dip

Lake

Use the map to answer the questions 1 to 7

- A. South West to South East
 B. East to West
 C. North West to East
 D. West to North East
3. The climate of the western side of Buterema area can be described as _
 A. Hot and dry B. Cool and dry
 C. Hot and wet D. Cool and wet
4. Which one of the following is Not an economic activity of the people of Buterema area.
 A. Fishing B. Trade
 C. Tourism D. Farming
5. Buterema area is headed by ___?
 A. Chief B. Police
 C. Governor D. District officer
6. The settlement of in the area can be described as ___?
 A. Linear B. Nucleated
 C. Scattered D. Sparse
7. Which one of the following is the MAIN means of transport in Buterema area?
 A. Air B. Railway
 C. Road D. Water
8. Which one of the following vegetation is found in hot and dry areas?
 A. Marshes B. Scrubs
 C. Riverine D. Woodland
9. All the following are elements of a good map. Which one is not?
 A. Key B. Scale
 C. Colour D. Title
10. Which one of the following is the largest relief region in Kenya.
 A. Nyika plateau
 B. Coastal lowland
 C. Lake basin
 D. Kenyan highlands.
11. Which one of the following country borders Kenya to the West.
 A. Ethiopia B. Somalia
 C. Tanzania D. Uganda
12. Kenya lies between longitudes ___
2. Which one of the following is the main religion in Buterema area?
 A. Christianity B. Islamic
 C. Hinduism D. Paganism
- A. 5°N and 5°S
 B. 34°E and 42°E
 C. 0°E and 42°E
 D. 5°E and 5°W
13. The instrument used to measure the strength of wind is ___
 A. Wind vane B. Barometer
 C. Rain gauge D. Wind sock
14. Which one of the following groups of community belongs to Plain Nilotes only?
 A. Maasai, Luo, Samburu
 B. Nandi, Pokot, Samburu
 C. Turkana, Tugen, Maasai
 D. Samburu. Iteso, Turkana
15. Which one of the following is the main language group in Kenya.
 A. Bantus B. Europeans
 C. Cushites D. Nilotes
16. The first group of Luo to enter Kenya were
 A. Joka-Owiny
 B. Joka-Omollo
 C. Joka – Jok
 D. Abasuba
17. Census in Kenya are carried out after every ___ years.
 A. 10 years B. 5 years
 C. 12 years D. 6 years
18. The River Lakes Nilotes in Kenya settled in the ___
 A. Coastal lowlands B. Rift valley
 C. Highlands D. Lake Basin
19. Which of the following is NOT a traditional skill taught in the past?
 A. Black smith
 B. Midwifery
 C. Iron smelting
 D. Computer literacy

Use the map below to answer questions 20-24.



20. The national park labeled A is known as ____
 A. Marsabit B. Sibiloi
 C. Amboseli D. Ruma
21. Which type of forest is found in the area marked XXX.
 A. Highland forest
 B. Equatorial forest
 C. Tropical forest
 D. Mangrove forest
22. The town marked W on the map is called ____
 A. Moyale B. Garisa
 C. Mandera D. Lodwar
23. The physical feature marked M is called ____
 A. Rift valley B. Mount Kenya
 C. Highland D. Lake Nakuru
24. The river marked Z drains its water in ____?
 A. Lake Victoria
 B. Lake Naivasha
 C. Indian Ocean
 D. Lake Nakuru
25. Another name for black cotton soil is
 A. Young soil
 B. Volcanic soil
 C. Loamy soil
 D. Clay soil
26. The following Rivers drain into Lake Victoria Except.
 A. Sio B. Nzoia
 C. Kerio D. Kujja

27. Which one of the following is NOT a responsibility of children in the family.
 A. Obeying members of the family
 B. Protecting the family property
 C. Providing for the family
 D. Helping in household chores
28. Which one of the following is NOT an example of a traditional industry?
 A. Pots making
 B. Glass making
 C. Weaving
 D. Basketing
29. Which one of the following marked the end of childhood in most communities.
 A. Circumcision B. Marriage
 C. Burial D. Naming
30. Which one of the following consist of a nuclear family?
 A. Father, son, mother
 B. Father, daughter, son
 C. Mother sister, brother, uncle
 D. Grandmother, father, sister.
31. Which one of the following is NOT an element of weather?
 A. Rain B. Wind
 C. Temperature D. Longitude
32. Which one of the following is the main importance of cash crops in Kenya?
 A. Creates employment
 B. Earns foreign exchange
 C. Provide food
 D. Provide high standards of living
33. Dairy farming is MAINLY carried out in areas that are ____
 A. Hot and wet
 B. Cool and wet
 C. Hot and dry
 D. Cool and dry
34. Communities in the past interacted through three of the following except.
 A. Migrations B. Wars
 C. Education D. Trade

35. Which one of the following communities is NOT one of the Cushitic speakers of Kenya?
 A. Rendile B. Orma
 C. Gabbra D. Pokomo
36. The imaginary lines drawn on a map that run from east to west are called.
 A. Longitudes B. Altitude
 C. Equator D. Latitudes
37. The MAIN tourist attraction along the coast of Kenya is ____
 A. Sandy beaches
 B. Wildlife
 C. Historical sites
 D. Cultural attractions
38. Three of the following are modern methods of fishing except ____
 A. Use of herbs
 B. Trawling
 C. Purse – sening
 D. Net drifting
39. Before colonization, the Nandi were led by a spiritual leader known as?
 A. Orkoiyot B. Omugambi
 C. Oloibon D. Nabongo
40. Three of the following are hardwoods EXCEPT one. Which one is it?
 A. Pine B. Mahogany
 C. Mvule D. Meru Oak
41. The walls of the Rift valley are referred to as ____
 A. Cliffs B. Faults
 C. Valleys D. Escarpments
42. The main economic activity in Kenya is ____
 A. Saw milling B. Tourism
 C. Farming D. Mining
43. Dairy cattle is mainly kept for the production of ____
 A. Milk B. Skins
 C. Wool D. Meat
44. The type of trade whereby people exchanged goods for other goods is known as ____
 A. Goods exchange
 B. Local trade
 C. Barter trade
 D. Long distance trade
45. Which one of the following cash crops is used in the manufacture of bread?
 A. Cotton B. Coffee
 C. Tea D. Wheat
46. Which is the common means of transport in Kenya?
 A. Air B. Road
 C. Rail D. Water
47. Which among the following is NOT a rift valley lake?
 A. Lake Magadi
 B. Lake Baringo
 C. Lake Victoria
 D. Lake Bogoria
48. The MAIN cause of road accidents in Kenya is ____?
 A. Unroad worthy vehicles
 B. Poor state of roads
 C. Overspeeding
 D. Careless driving
49. The black colour on our national flag symbolizes ____
 A. The African people of Kenya
 B. Peace in our country
 C. The blood shed during the struggle for independence
 D. Vegetation cover showing the fertility of our land.
50. The main problem facing tourism in Kenya in the recent years is?
 A. Poaching B. Drought
 C. Terrorism D. Pests and diseases
51. Before the coming of the Europeans the Abawanga of western Kenya were ruled by
 A. Chiefs B. Presidents
 C. Kings D. Council of elders
52. Who among the following is Not a member of the county Assembly
 A. Speaker of the County assembly
 B. Deputy Governor
 C. Nominated Members

- D. Youth representative
53. Which one of the following is NOT an arm of the government?
- A. University council
B. Judiciary
C. Executive
D. Parliament
54. Which of the following is a way in which a person can become a Kenyan citizen.
- A. By association
B. By naturalization
C. By registration
D. By voting
55. The cheapest method of preserving fish is ___?
- A. Smoking B. Refrigeration
C. Sundrying D. Salting
56. The following are salty water lakes which one is NOT.
- A. L. Magadi
B. Lake Elementaita
C. L. Baringo
D. Lake Nakuru
57. The illegal killing of wild animals is known as ___
- A. Hunting B. Game warden
C. Wildlife D. Poaching
58. Masaku was a prominent leader from which community?
- A. Abagusii B. Nandi
C. Giriama D. Akamba
59. Kenya's MAIN export crop is _____
- A. Tea B. Sugar cane
C. Cotton D. Pyrethrum
60. The first prime minister of Kenya was _____
- A. Raila Odinga
B. Daniel Arap Moi
C. Jomo Kenyatta
D. Oginga Odinga

CRE

61. I am fearfully and wonderfully made. These words are found in the book of
- A. Genesis B. Psalms
C. Exodus D. Romans
62. Adam and Eve were created in the garden of _____
- A. Gethsemane B. Olives
C. Eden D. Sinai
63. On which mountain did Noah's Ark rest
- A. Arrarat B. Olives
C. Carmel D. Nebo
64. God called Moses when he was living with _____
- A. Abraham B. Aaron
C. Joshua D. Jethro
65. The ten commandments are written in the book of _____
- A. Genesis B. Isaiah
C. Exodus D. Daniel
66. The Israelites were slaves in the land of _____
- A. Canaan B. Nazareth
C. Galilee D. Egypt
67. King _____ coveted Naboth's vineyard.
- A. Ahab B. Solomon
C. David D. Herod
68. Which one of the following is not a physical change in boys.
- A. Shoulders and chest broaden
B. Menstrual flow begins
C. Experience wet dreams
D. The voice becomes deep
69. The first greatest commandment is
- A. Do not steal
B. Love the Lord your God with all your heart, mind and soul
C. Love your neighbour as you love yourself.
D. Do commit murder.
70. Strong feelings that we experience are called.
- A. Emotions B. love
C. Peace D. joy

71. Which of these miracles shows power over nature.
- Healing lepers
 - Healing of paralysed man
 - Casting out demons
 - Calming the storm
72. The first four disciples of Jesus were
- Farmers
 - Pastoralets
 - Fishermen
 - Tax collector
73. I foretold the birth of Jesus. Who am I ?
- Micah
 - Isaiah
 - Jeremiah
 - Joel
74. Jesus turned water into wine at ____
- Jericho
 - Canaan
 - Capernaum
 - Cana
75. Who prepared the way for the coming of Jesus Christ?
- John the Baptist
 - Angels
 - Holy Spirit
 - God
76. By washing the disciples feet, Jesus was teaching about?
- Hygiene
 - service
 - Faith
 - Unity
77. The quotation ‘ I believe in the Holy Spirit is found in the ____
- Lord’s prayer
 - Apostle’s creed
 - Loyalty pledge
 - The grace
78. We celebrate the suffering and resurrection of Jesus during ____
- Easter
 - Pentecost
 - Passover
 - Last supper.
79. The best way to treat enemies is by showing them ____
- Hatred
 - Fights
 - Love
 - Abuse
80. The word Eternal life means ____
- Life that ends at death
 - Life that is long
 - Life that has no problem
 - Life that has no end
81. Which of the following is not an effect of irresponsible behaviour.
- School drop out
 - Early pregnancy
 - HIV/AIDS
 - Happiness
82. In traditional African Society, people worshipped God in ____
- Temples
 - Churches
 - Shrines
 - Mosques
83. Why did people marry in Traditional African Societies.
- Get children
 - Raise money
 - Become leader
 - Get respect
84. Immanuel means ____
- Resurrection
 - God with us
 - Savior
 - Anointed one.
85. Who of the following did not make the right choices
- Ruth
 - Saphira
 - Abraham
 - Noah
86. Which of the following is not a quality of a good leader?
- Humble
 - Honest
 - Transparent
 - Cruel
87. Shipwoni found 100 shillings in the school compound. What is the best thing for him to do?
- Take it to the teacher on duty
 - Buy himself sweets
 - Give the money to the pastor
 - Share with friends
88. What is the best thing for a std five boy to do on a Sabbath.
- Go fishing
 - Go hunting
 - Go to church
 - Go to video show.
89. In order for God to forgive us, we should ____ others.
- Forgive
 - Annoy
 - Abuse
 - remember.

90. Which of the following is not a gift of the Holy spirit.

A. Peace

B. Wisdom

C. Faith

D. Preaching