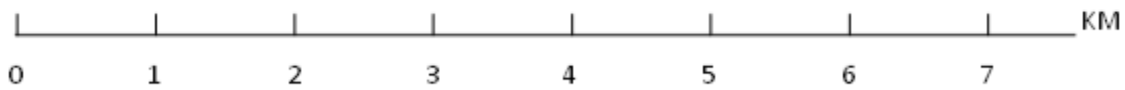
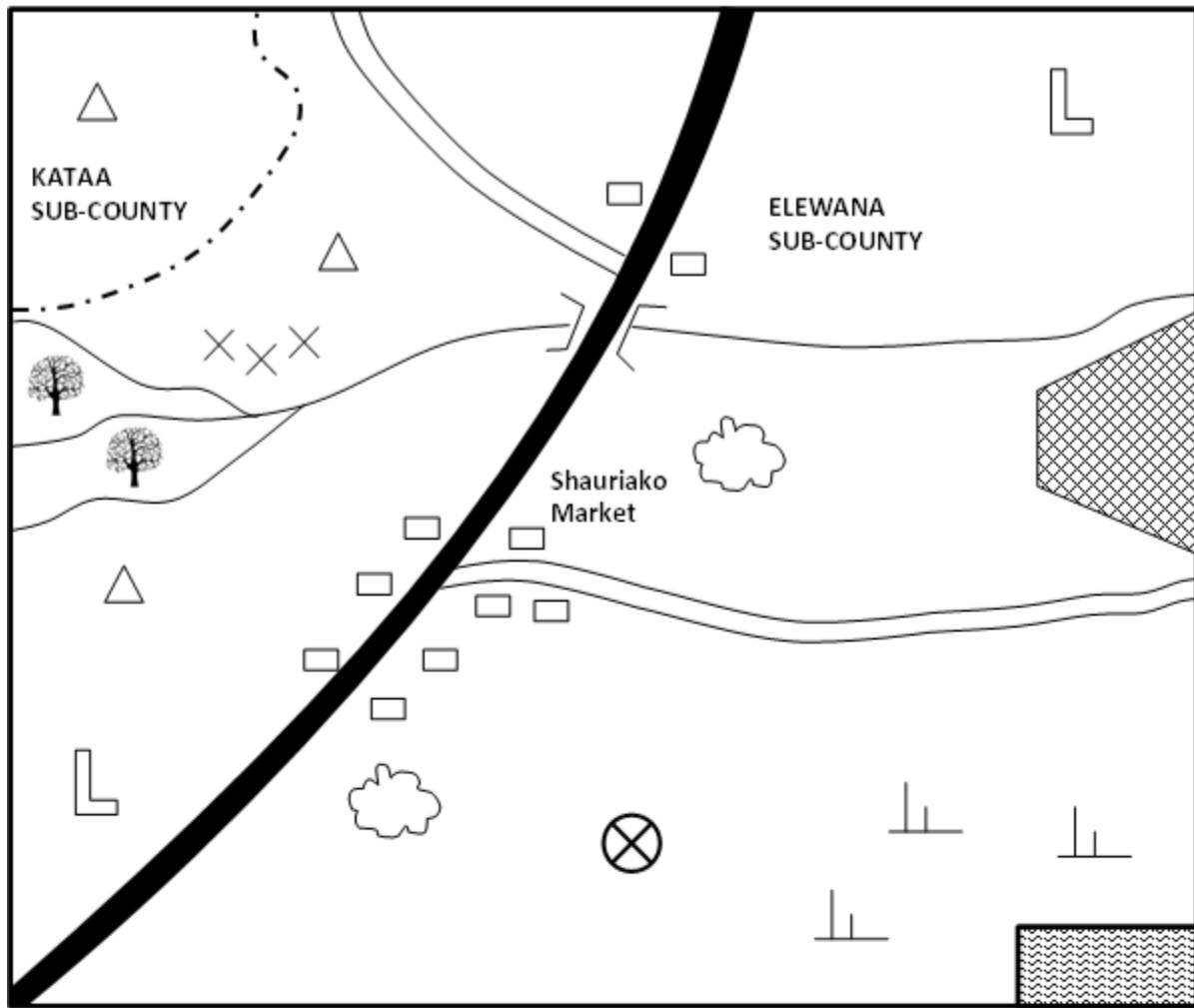


**EDU SERIES EXAM**  
**SOCIAL STUDIES**  
**SOCIAL STUDIES STD 7**

## UPENDO AREA



**KEY**


- |        |                     |                |
|--------|---------------------|----------------|
| Forest | Airstrip            | Tea plantation |
| School | Game reserve        | Quarry         |
| Hill   | Flower Farm         | Tarmac road    |
| Scrub  | Sub-County boundary |                |

- What is the direction of game reserve from the tea plantation?  
A. South East      B. North West  
C. South West      D. North East
- The type of climate to the western part of the area is likely to be?  
A. Cool and wet  
B. Hot and wet  
C. Cool and dry  
D. Hot and dry
- The person incharge of Elewana Sub county is  
A. Governor  
B. County Commissioner  
C. Deputy County Commissioner  
D. Member of County Assembly
- Which one of the following economic activity is LEAST practiced in Upendo area?  
A. Mining  
B. Crop farming  
C. Lumbering  
D. tourism
- Shauriako market has grown and expended due to  
A. security  
B. tea growing  
C. educational facilities  
D. trading activities
- The point marked P is called?  
A. junction      B. tributary  
C. Delta      D. Confluence
- The length of the tarmac road is approximately  
A. 9 KM  
B. 10 KM  
C. 5 KM  
D. 7 KM
- Kenyas leading crop export is  
A. Soda ash  
B. Tea  
C. Coffee  
D. Sugarcane
- The type of rainfall experienced within the coastal region and lake region parts of Africa is  
A. Relief  
B. Convectional  
C. Cyclonic  
D. Orographic

**Use the map of Africa to answer question 10 and 11**



- The current label Y that influences climate in Africa is called \_\_\_\_\_  
A. Canary cold current  
B. Benguela cold current  
C. Somali warm current  
D. Mozambique warm current
- The wind marked W is known to as \_\_\_\_\_  
A. Western winds  
B. South east trade winds  
C. Harmmatan winds  
D. North winds trade winds
- The sun is overhead on tropic of cancer on  
A. 22<sup>nd</sup> December  
B. 3<sup>rd</sup> march  
C. 21<sup>st</sup> June  
D. 23<sup>rd</sup> September
- Which one of the following is not a member of a clan?  
A. Grandfather  
B. Sister  
C. Father  
D. grandmother
- The method of fishing drawn below is called \_\_\_\_\_



- A. Purse seining
  - B. Trawling
  - C. Drifting
  - D. Long lining
15. Which community resisted against European in Kenya
- A. Abawanga
  - B. Maasai
  - C. Giriama
  - D. Agikuyu
16. The main tourist attraction along the coastal region is
- A. Wildlife
  - B. Historical sites
  - C. Culture
  - D. Sandy beaches
17. Which one of the following is not a member Country of southern African development community (SADC)
- A. South Africa
  - B. Angola
  - C. Namibia
  - D. Ghana
18. Africa is separated from Sinai peninsula by the
- A. Red sea
  - B. Cape guardafai
  - C. Suez canal
  - D. Strait of babel
19. Nyamwezi was headed by chief called
- A. Rugaruga
  - B. Ntemi
  - C. Arkoyot
  - D. Oloibon
20. Who among the early visitors was **not** a trader?
- A. Morton Stanley
  - B. William Macknon
  - C. Carl Peters
  - D. Seyyid Said
21. The following is a description of a multipurpose river project in Africa
- i. Has source of water from three rivers
  - ii. Initiated by the first president of its country
  - iii. Hydroelectricity mainly used for smelting minerals
  - iv. Water used for irrigation of crops sugarcane, tobacco, peas
- The river described is called

- A. Volta River Scheme
  - B. Aswan High Dam
  - C. Perkera Irrigation Scheme
  - D. Kariba Dam
22. Pastoral farming has benefited the economy of Africa in the following ways except one, which one?
- A. Reclaimed land that is not agriculturally viable
  - B. Large number of animals are slaughtered for meat export
  - C. Poor quality livestock is destroyed and replaced with exotic breeds
  - D. Livestock products are used in manufacturing industries
23. If Kenya wanted to import hardwood timber which of the following countries within COMESA can supply to Kenya?
- A. Sudan
  - B. Egypt
  - C. Namibia
  - D. DRC Congo
24. The main function of economic community of west African elders modeling group (ECOMOG) is?
- A. Produce common currency for regional trade
  - B. Develop transport within member state
  - C. Select suitable member states within the region
  - D. Ensure political stability within state members
25. The following countries in Africa are linked by the Trans African Highway except?
- A. Uganda
  - B. Ghana
  - C. DRC congo
  - D. Cameroon
26. The problems facing urban areas in East Africa can be best solved by?
- A. Decentralization of industries to create jobs in the rural areas
  - B. Demolish slums and develop decent houses in urban areas
  - C. Arrest all suspected criminals in urban areas
  - D. Recycle all the garbage to ensure clean environment
27. The following are contributions of a prominent leader in Africa

- i. He was among the founder member of OAU
  - ii. He was awarded the beyond war award in 1985
  - iii. He belrused in sharing resourses as opposed to private ownership
  - iv. He improved formal education in his country
- The leader described above is?
- A. Julius nyerere
  - B. Kwame nkurume
  - C. Haile Selassie
  - D. Nelson mandela

28. Which of the following vegetation zones mostly covers large parts of the Bahr-el Ghazal region in southern sudan
- A. Semi desert vegetation
  - B. Savanna woodland
  - C. Papyrus swampy vegetation
  - D. Mountain vegetation



29. Which of the following Semitic group represents Y
- A. Sanye B. Dahalo C. Falasha D. Burungu
30. The following are problems facing fishing in Africa, which one is not
- A. Presence of water hyacinth
  - B. Water pollution from leaking water vessels
  - C. Lack of sufficient funds to buy fishing equipment
  - D. Improved infrastructure
31. Lake formed behind Aswan High Dam is called?
- A. L. Masinga
  - B. L. Tana C. L. Kariba D. L. Nasser
32. The **main** reason of establishing Perkerra irrigation scheme is to
- A. Increase food production
  - B. Make use of available water in rivers
  - C. Settle landless people
  - D. Make use of desert areas

33. The following represents plain Nilotes in Uganda except
- A. Samburu
  - B. Jie
  - C. Iteso
  - D. karamajong
34. The common form of communication in Africa is
- A. Mobile phones
  - B. Radio
  - C. Social media
  - D. Fax mile
35. The **main** problem that faces wildlife in Kenya is
- A. Terrorism
  - B. Insecurity
  - C. Poaching
  - D. Drought
36. Which one of the following is **NOT** example of Mande speakers?
- A. Malinke
  - B. Dagomba
  - C. Soninke
  - D. Susu
37. Who writes minutes during the staff meeting?
- A. Head teacher
  - B. Senior teacher
  - C. Secretary to BOM
  - D. Deputy head teacher

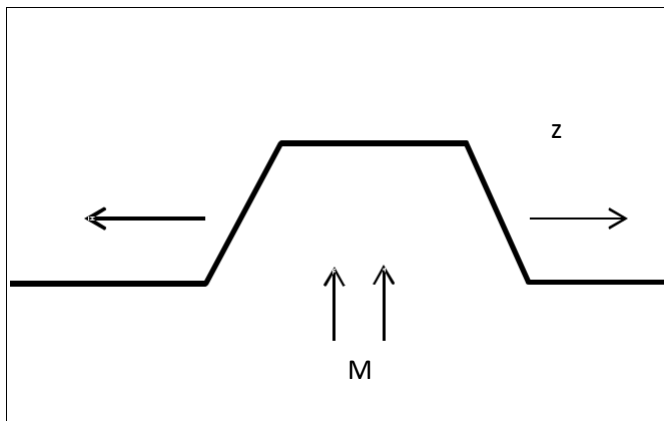
**Use the diagram to answer question 38**

X

38. The vegetation labeled x is referred to as
- A. Bamboo
  - B. Rain forest
  - C. Snow and bare rock
  - D. Health and moreland

39. I am a mineral found in Africa. I am used to make electrical wires, telephone wires, coins and vehicle radiators.  
Whom am I?  
A. Gold  
B. Copper  
C. Diamond  
D. Soda ash
40. The method used in solving conflict where the third person comes in to intervene is called?  
A. Litigation  
B. Reconciliation  
C. Dialogue  
D. Mediation
41. The method of mining flourspar is called \_\_\_\_\_  
A. Dredging  
B. Shaft method  
C. Open cast  
D. drilling
42. The instrument used to measure humidity is  
A. Barometer  
B. Rain gauge  
C. Hygrometer  
D. Thermometer

**Use the diagram to answer question 43 to 45**



43. The above feature shows formation of  
A. Rift valley  
B. Block mountain  
C. Volcanic mountain  
D. Lava dammed lake
44. The force marked M are known as  
A. Tensional forces  
B. Down thrust forces  
C. Compressional force  
D. Upthrust forces

45. Which one of the following features was Not formed as a result of the above process?  
A. Danakel Alps  
B. Ruwenzori  
C. Mau Ranges  
D. Cape ranges
46. Which one of the following countries was **NOT** a French colony?  
A. Benin  
B. Chad  
C. Lesotho  
D. Seychelles
47. Which one is **NOT** a way of inclusion of people with special needs in the society  
A. Name calling them  
B. Having positive attitudes  
C. Create friendly environment  
D. Giving equal opportunities
48. The process where citizens vote for a proposed constitution is known as  
A. General election  
B. Referendum  
C. Census  
D. voting
49. Which one of the following has greatly contributed to the lack of peace in Kenyan Somalia border  
A. disagreement about boundaries  
B. cattle rusting  
C. lack of an effective government in Somalia  
D. lack of employment of Al-Shabaab
50. Kenya became a Republic on  
A. 1<sup>st</sup> June 1963  
B. 20<sup>th</sup> oct 1952  
C. 12<sup>th</sup> Dec 1964  
D. 1<sup>st</sup> June 1964
51. Who among the following persons in NOT a member of the cabinet?  
A. President  
B. Chief Justice  
C. Attorney general  
D. Cabinet secretaries
52. Who among the following chairs parliamentary sessions  
A. Speaker  
B. Chief justice  
C. President  
D. governor

53. The head and chairperson of the County executive committee is?  
 A. Governor  
 B. Senator  
 C. MCA  
 D. President
54. The chief administrator and accounting officer of the judiciary is the  
 A. Judges  
 B. Chief justice  
 C. Chief Registrar  
 D. Attorney general
55. The following are some of the causes of lawlessness in the society. Which one is **NOT**?  
 A. Education  
 B. Poverty  
 C. Tribalism  
 D. corruption
56. Okumosi came across a Std seven girl who had been raped in the nearby sugarcane plantation. The immediate action that was supposed to be taken was?  
 A. Inform the head teacher  
 B. Inform the chief  
 C. Report to the nearest police station  
 D. Take her to the nearby hospital
57. The following are conditions required for growth of a certain crop in Africa
- i. High temperature of 21°C - 27°C
  - ii. High humidity
  - iii. Dry season before harvesting
  - iv. Fertile soils
- The crop is likely to be  
 A. Tea  
 B. Sugarcane  
 C. Pyrethrum  
 D. sisal
58. Which of the following species of trees is a soft wood?  
 A. Camphor  
 B. Elgon teak  
 C. Eucalyptus  
 D. Meru oak
59. The highest mountain in Africa is  
 A. Mt. Kenya  
 B. Mt. Kilimanjaro  
 C. Cape Ranges Mountain  
 D. Mt. Ruwenzori

60. A situation where days and nights are almost equal is known as  
 A. Solstice  
 B. Hemisphere  
 C. Tropics  
 D. Equinox

**C.R.E**

61. Which one of the following is the MAIN reason why God put Adam and Eve in the Garden of Eden?  
 A. To eat all the fruits in the garden except fruits from the tree in the middle  
 B. To guard it and cultivate it.  
 C. To name all the animals  
 D. Because they were special creatures
62. During the call of Abraham, God instructed him to move from \_\_\_\_\_ to \_\_\_\_\_  
 A. Haran to Ur  
 B. Canaan to Haran  
 C. Haran to Canaan  
 D. Ur to Canaan
63. Jacob wrestled with an angel of the lord at a place called  
 A. Peniel  
 B. Bethel  
 C. Haran  
 D. Ur
64. Who among the following advised Moses to appoint judges to help him solve cases?  
 A. Samuel  
 B. Pharaoh  
 C. Aaron  
 D. Jethro
65. During the Exodus God led the Israelites in the form of  
 A. Fire and flaming torch  
 B. A smoking fire pot and cloud  
 C. Fire and cloud  
 D. Pillar of clouds and a rainbow

66. Which of the following was an achievement of the second King of Israel?
- Bringing the ark of the covenant to Jerusalem
  - Building the temple
  - Taking Uriah's wife
  - Marrying many wives
67. 1<sup>st</sup> Kings 3:9 "so give me the wisdom I need to rule your people with justice and to know the difference between good and evil" These words were spoken by
- Saul
  - Solomon
  - David
  - Samuel
68. Who among the following prophets said that the Messiah would be wonderful counselor?
- Micah
  - Joel
  - Hosea
  - Isaiah
69. I am a prophet; I anointed the first and second King of Israel. Who am I?
- Isaiah
  - Micah
  - Jeremiah
  - Samuel
70. Who among the following were in the temple during the presentation of Baby Jesus?
- John and Zachariah
  - Hannah and Elikanah
  - Annah and Simeon
  - Zachariah and Elizabeth
71. During the transfiguration of Jesus. Gods voice was heard saying
- "Do not move any closer, you are standing on holy grounds"
  - "This is my own dear son that am well pleased with, listen to him"
  - "Never again shall a destroy the whole world using floods"
  - "This is my own dear son that am well pleased with"
72. How old was Jesus when he accompanied his parents to Jerusalem to celebrate the Passover festival?
- Twelve years old
  - Eight years old
  - Forty days old
  - Eight days old
73. What virtue do Christians learn from the parable of the Pharisee and the tax collector?
- Repentance
  - Humility
  - Thankfulness
  - Persistence
74. Which one of the following is not a teaching of Jesus on prayer?
- Pray while fasting
  - Use many words to pray
  - Prayer should be said in humility
  - Be persistent
75. What lesson do Christians learn from the incident when Jesus healed the ten lepers?
- Always forgive
  - Be humble
  - Be thankful
  - Resist temptation
76. "Surely this man was the son of God". Who said these words?
- The Roman officer
  - Simeon of Cyrene
  - The adamant thief
  - The repentant thief
77. When did Cleophas and his friends who were on the way to Emmaus recognize Jesus?
- When he said the lord's prayer
  - When he greeted them
  - When he asked them what they were saying
  - When he broke the bread
78. What was Saul going to do in Damascus when light struck him?



- A. Preach the gospel  
B. Pray for Christians  
C. Persecute Christians  
D. To stone Stephen
79. The Ethiopian Eunuch baptized by Philip was reading the scripture from the book of  
A. Jeremiah  
B. Isaiah  
C. Ezekiel  
D. Daniel
80. Which one of the following books is an epistle written by Paul?  
A. Romans  
B. Hebrews  
C. Jude  
D. James
81. Which one of the following belief is found in both Traditional African community and Christianity  
A. Resurrection of the body  
B. Life after death  
C. Holy trinity  
D. Second coming of Christ
82. Which one of the following was carried out by priest in traditional African communities?  
A. Solving disputes  
B. Preaching  
C. Making sacrifices  
D. Baptizing believers
83. Which of the following is not a Christian practice?  
A. Circumcision of male  
B. Per taking Holy communion  
C. Use of love portion  
D. Burying the dead
84. In traditional African communities, youths were taught moral values by  
A. Elders  
B. Peers  
C. Seers  
D. warriors
85. Which one of the following is a way of caring for the environment?  
A. Cultivating along river banks  
B. Cutting trees for timber  
C. Rearing a lot of livestock  
D. Reclaiming riparian land
86. While playing in the school field, John picks a wallet with a thousand shillings note in it. As a Christian, what should John do?  
A. Start looking for the owner  
B. Keep it and take it to his mother  
C. Throw the wallet and share the money with his friends  
D. Take it to the teacher on duty
87. A standard seven girl is in relationship with a fellow standard seven boy. As a Christian, what advice will you give?  
A. Their body is the temple of God and should stop the relationship.  
B. Do it secretly so that other pupils should not know.  
C. Marry one another and stop learning  
D. Continue with the relationship but work hard in class.
88. Jane does not like doing her homework. What advice can you give as a Christian?  
A. Help her with your book for her to copy  
B. Pretend to the teacher that the book is lost  
C. Stop being lazy and do her work  
D. Tell her friend to be doing it for her
89. Christians **mainly** discourage abortion because  
A. The foetus is innocent  
B. Life begins at conception  
C. It can lead to death of the mother  
D. Abortion is a crime
90. The **main** reason why Christians condemn prostitution is because: it leads to  
A. Misuse of sex  
B. Spread of diseases  
C. Unwanted pregnancy  
D. Break up of families