



# COMPETENCY BASED CURRICULUM

## **GRADE 4 EXAM EDU SERIES**

### SOCIAL STUDIES & C.R.E

4

Name—*Time:2Hou*

Teachers Number]

\_\_\_\_\_ ] ] ] ] ]

Gender

• 1 w \_ J

County Name County code] \_

Sub -County Name \_ Sub - county code]

\_\_\_\_\_ ] ] ] ] ]

School Name \_\_\_\_\_


School code[

\_\_\_\_\_ [ " ]

### **TEACHER'S SCORING GUIDE**

The teacher to fill the grid below after marking the learner's work.

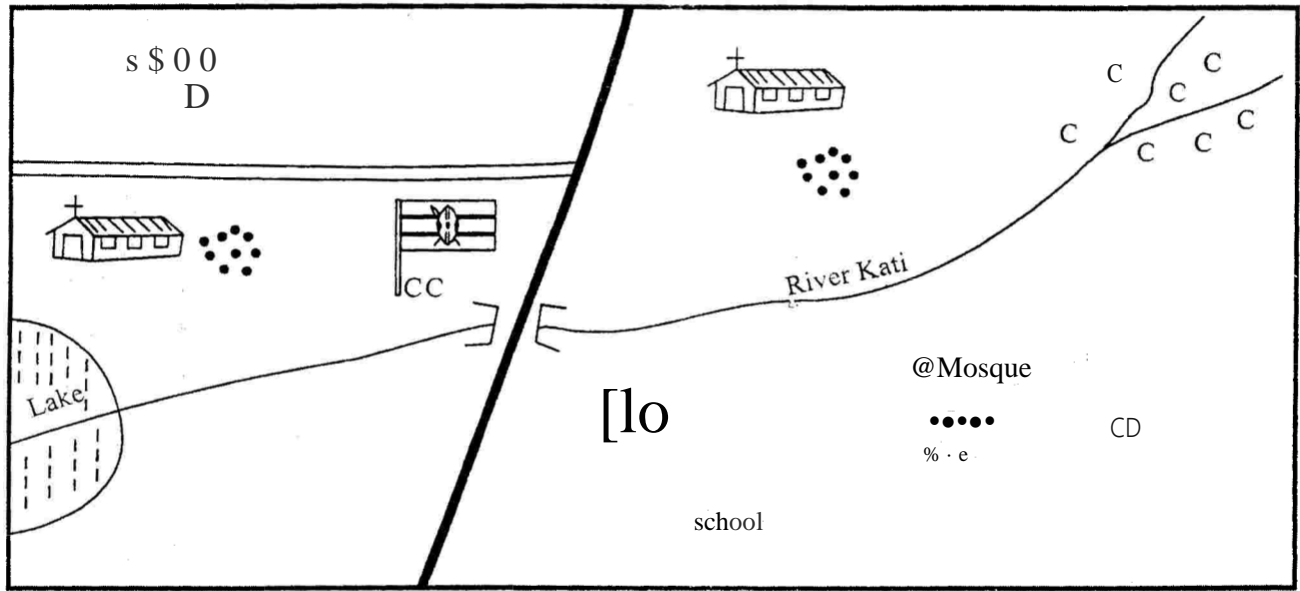
	Exceeds expectation	Meets expectation	Approaching expectation	Below expectation
SECTION A (SST)				
SECTION B (CRE)				





### KATI AREA

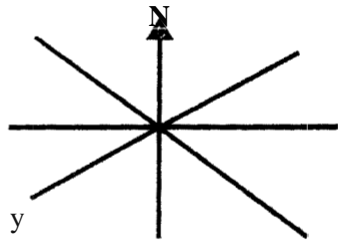
Study the map of Kati area and use it to answer questions 1-4



River	Church	School	Settlements	P.S - Police Station
bridge	Mosque	Cattle dip	Buildings	Coffee
Road	Chief's office	Lake		

1. People in kati area get water from a \_\_\_\_\_
2. The **main** cash crop in the area is \_\_\_\_\_
3. The name of the school in kati area is \_\_\_\_\_
4. Kati area is likely to be \_\_\_\_\_  
**(sub-location, location, county)**
5. River kati starts from what direction \_\_\_\_\_
6. Children you learn with in the same class and share items are your \_\_\_\_\_
7. Elijah is facing the sun in the morning. He is walking towards \_\_\_\_\_

8. An instrument used to tell the direction of one place from another is called \_\_\_\_\_
9. The sun sets to the \_\_\_\_\_
10. The other name for the four **main** points of a compass is \_\_\_\_\_
11. Mountains, rivers, lakes are all called \_\_\_\_\_ features.
12. The direction of a compass marked below is called \_\_\_\_\_
13. A person who uses compass direction to land at an airport is called \_\_\_\_\_





14. There are ---- counties in Kenya.

15. The smallest county in Kenya is \_\_\_\_\_

16. The head of a county is called \_\_\_\_\_

17. Which one of the following is the odd one out?  
(bus, aeroplane, ship and cart)

18. An area with many trees is called a \_\_\_\_\_

19. Rainfall, sunshine, temperature, wind are all called ----

20. Drops of water that fall from the sky are called ----  
(clouds, rain, sunshine)

21. The head of a lorry is called \_\_\_\_\_

22. A river which flows throughout the year is called ---

23. Crops that are grown for sale are called ----

24. My father's father is my ----

25. Name one physical feature in your county.


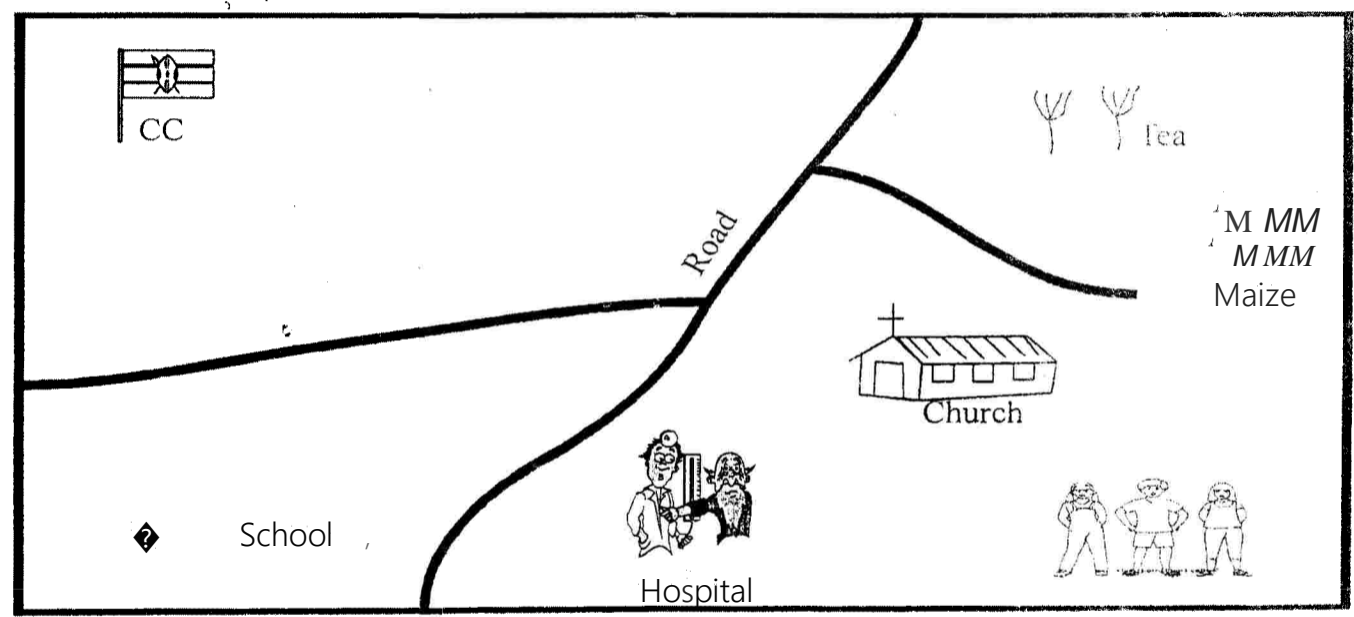
26. Kamau is sitting facing the sun in the morning. His right hand is facing \_

27. Planting different types of crops at different times is called ----  
(soil erosion, crop rotation,

**shifting cultivation)**

28. What is the name of your county?  
\_\_\_\_\_

Use the diagram below to answer questions 29 - 32.





29. Name one economic activity in the picture \_\_\_\_\_
30. Name the two crops that are sold in the picture \_\_\_\_\_
31. The means of transport in the area is by \_\_\_\_\_
32. The roof of the houses in the picture are made of \_\_\_\_\_  
**(soil, grass, stones, Iron sheets)**
33. People come together in our county to \_\_\_\_\_  
**(chase one another, help one another, quarrel with one another)**
34. Dairy animals are mainly kept for \_\_\_\_\_  
**(meat, milk, blood, mutton)**
35. The people who keep law and order in our country are the \_\_\_\_\_
36. A flat area is called a \_\_\_\_\_  
**(valley, coast, plain)**
37. A person who mends our cloths is called a \_\_\_\_\_
38. The largest county in Kenya is \_\_\_\_\_
39. Mountains, valleys, hills and rivers all are called features.
40. A weather instrument used to measure the amount of rainfall is called \_\_\_\_\_

**CHRISTIAN RELIGIOUS EDUCATION.**

1. Human beings are special. They are created in \_\_\_\_\_ image.
2. Complete psalms 139 : 13 "You created every part of me, you put me together in my \_\_\_\_\_ womb.
3. Write one good thought  
\_\_\_\_\_
4. The commandment that has a promised added is  
\_\_\_\_\_
5. \_\_\_\_\_ was punished by abusing his sister sexually.  
**(David, Amnon)**
6. Our bodies are the \_\_\_\_\_ of the Holy spirit.
7. God does not make mistakes we say He is \_\_\_\_\_  
**(loving, Holy)**
8. When I am sad, I can control my emotions by \_\_\_\_\_  
**(crying, sleeping, playing)**
9. The members of a nuclear family are \_\_\_\_\_ and \_\_\_\_\_
10. When your friend wrong you, you should \_\_\_\_\_  
**(fight, abuse, forgive)**