

GRADE ONE


COMPETENCE BASED CURRICULUM

MATHEMATICAL ACTIVITIES


NAME	
SCHOOL	
GRADE	

Count the items

1.



2.



3.



4. $5 + 4 =$ _____

5. $3 + 3 + 3 =$ _____

6. $4 + 2 + 7 =$ _____

7. $6 + 7 + 1 =$ _____

8. 13

+4

9. 4

3

+2

10. 6

2

+3

11. 5 tens 6 ones = _____

12. 7 ones = _____

13. 8 tens 4 ones = _____

14. 54 = _____tens _____ones

15. 3 = _____tens _____ones

16. 34 = _____tens _____ones

17. 10+ 6=

18. 6-6=

19. Add 11 to 1 =

20. 94

-2

21. 14
 -3

22. 11-4=

Write in words

23. 9 _____

24 13 _____

25. 14 _____

26. 20 _____

Write the next number

27. 10, 20, 30, _____

28. 5, 6, 7, _____

29. 9, 8, 7, 6, 5, 4, _____

30. A week has _____ days.

31. Three cats have _____ ears.

32. Monday, Tuesday, Wednesday , _____


33. Which one is longer?

A

B

Name the lines

34.



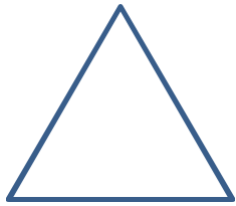
35. _____

(curved line ,straight line)


36. _____ + 3 = 6

Name the shapes

37.



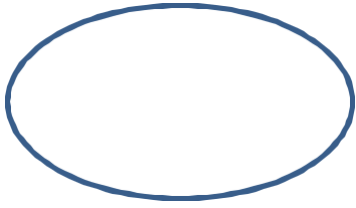
38.



39.



40.



(circle , triangle, oval, star)

Write in numbers

41. Twenty four _____

42. Sixteen _____

43. Thirty eight _____

44. Zero _____

45. The first day of the week is _____ (Monday, Sunday)

46. Put together 7 and 6 = _____

47. $2 + 3 + 0 =$ _____

48. $7 - 2 =$ _____

49. I have _____ toes.

50. $8 + 3 + 4 =$ _____