

**GRADE TWO**  
**COMPETENCE BASED CURRICULUM**  
**MATHEMATICAL ACTIVITIES**

<b>NAME</b>	
<b>SCHOOL</b>	
<b>GRADE</b>	

1. 98 = \_\_\_\_\_ tens \_\_\_\_\_ ones
2. 54 = \_\_\_\_\_ tens \_\_\_\_\_ ones
3. 6 = \_\_\_\_\_ tens \_\_\_\_\_ ones
4. 356 = \_\_\_\_\_ hundreds \_\_\_\_\_ tens  
\_\_\_\_\_ ones


**Write the numbers in figures**

5. Two hundred and fifty six  
\_\_\_\_\_
6. Three hundred and thirty three  
\_\_\_\_\_
7. Eighty six \_\_\_\_\_

**Fill the missing numbers**

8. 0, 5, 10, 15, \_\_\_\_\_

9. 2, 4, 6, \_\_\_\_\_, 10, 12
10. 3, 6, 9, 12, 15, \_\_\_\_\_
11. Shade  $\frac{1}{2}$



12. A quarter is written as \_\_\_\_\_
13.  $4 + 4 + 3 =$  \_\_\_\_\_
14.  $26 + 13 =$  \_\_\_\_\_

15.     50

     + 30

---



---

16.     40

     +20

---



---

17.     Tens           Ones

         7               4

     -                 2

---



---

18.     Tens           Ones

         6               9

     - 44

---



---

19. Kamau bought 17 books and 10 pencils. How many items did he buy altogether? \_\_\_\_\_

20.     Add 7 to 8 =

21.     Subtract 25 from 50 = \_\_\_\_\_

22.     \_\_\_\_\_ + 7 = 12

23.     10 + \_\_\_\_\_ = 19

24.     2+2+2+2=\_\_\_\_ x \_\_\_\_\_= \_\_\_\_\_

25.  $3+3+3=$  \_\_\_\_\_  $\times$  \_\_\_\_\_  $=$  \_\_\_\_\_

26.



\_\_\_\_\_  $\times$  \_\_\_\_\_  $=$  \_\_\_\_\_

27.



\_\_\_\_\_  $\times$  \_\_\_\_\_  $=$  \_\_\_\_\_

28. Share 20 mangoes among 4 boys  
Each will get \_\_\_\_\_

29. The month of March has \_\_\_\_\_  
days.

30. 1 hundreds 4 tens 6 ones =  
\_\_\_\_\_

31. 0 hundreds 3 tens 2 ones = \_\_\_\_\_

32. How many legs do 4 cows have  
\_\_\_\_\_

33. Which number is big? 55 \_\_\_\_\_ or 25

**Arrange from the largest to the smallest**

34. 38 , 53 ,89 ,98 23 ,65 ,16  
\_\_\_\_\_

35. 123 ,156 ,103 ,189 ,127  
\_\_\_\_\_

36. 2 weeks = \_\_\_\_\_ days

37. \_\_\_\_\_ is the 6<sup>th</sup> month of  
the year.

38. Put together 34 and 23 = \_\_\_\_\_

39. Draw a curved line

**Write the place value of 2 in**

40. 27 \_\_\_\_\_

41. 234 \_\_\_\_\_

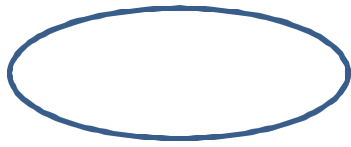
42. 72 \_\_\_\_\_

43. 521 \_\_\_\_\_


44. A football ball has \_\_\_\_\_  
shape.

45.  $15 - 10 =$  \_\_\_\_\_

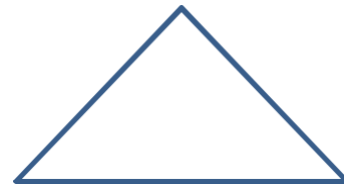
**Name the shapes**



46. \_\_\_\_\_



47. \_\_\_\_\_



48. \_\_\_\_\_

49. A year has \_\_\_\_\_ months.

50. \_\_\_\_\_ is the second day of the week.