

KCPE 2005

GEOGRAPHY, HISTORY, CIVICS AND RELIGIOUS EDUCATION

Time: 2 hours 15 minutes

READ THESE INSTRUCTIONS CAREFULLY

1. You have been given this question booklet and a separate answer sheet. The question booklet contains 90 questions.
2. Do any necessary rough work in this booklet.
3. When you have chosen your answer, mark it on the **ANSWER SHEET**, not in this question booklet.

HOW TO USE THE ANSWER SHEET

4. Use an ordinary pencil only.
5. Make sure that you have written on the answer sheet:
YOUR INDEX NUMBER
YOUR NAME
NAME OF YOUR SCHOOL
6. By drawing a **dark line** inside the correct numbered boxes mark your full Index Number (i.e. School Code Number and the three-figure Candidate's Number) in the grid near the top of the answer sheet.
7. Do not make any marks outside the boxes.
8. Keep the sheet as clean as possible and do not fold it.
9. For each of the questions 1–90 four answers are given. The answers are lettered A, B, C, D. In each case only **ONE** of the four answers is correct. Choose the correct answer.
10. On the answer sheet the correct answer is to be shown by drawing a **dark line** inside the box in which the letter you have chosen is written.

Example

In the Question Booklet:

33. Among the Agikuyu, people who were initiated together formed

- A. a sub-tribe
- B. a clan
- C. a generation
- D. an age-group

The correct answer is "D".

On the answer sheet:

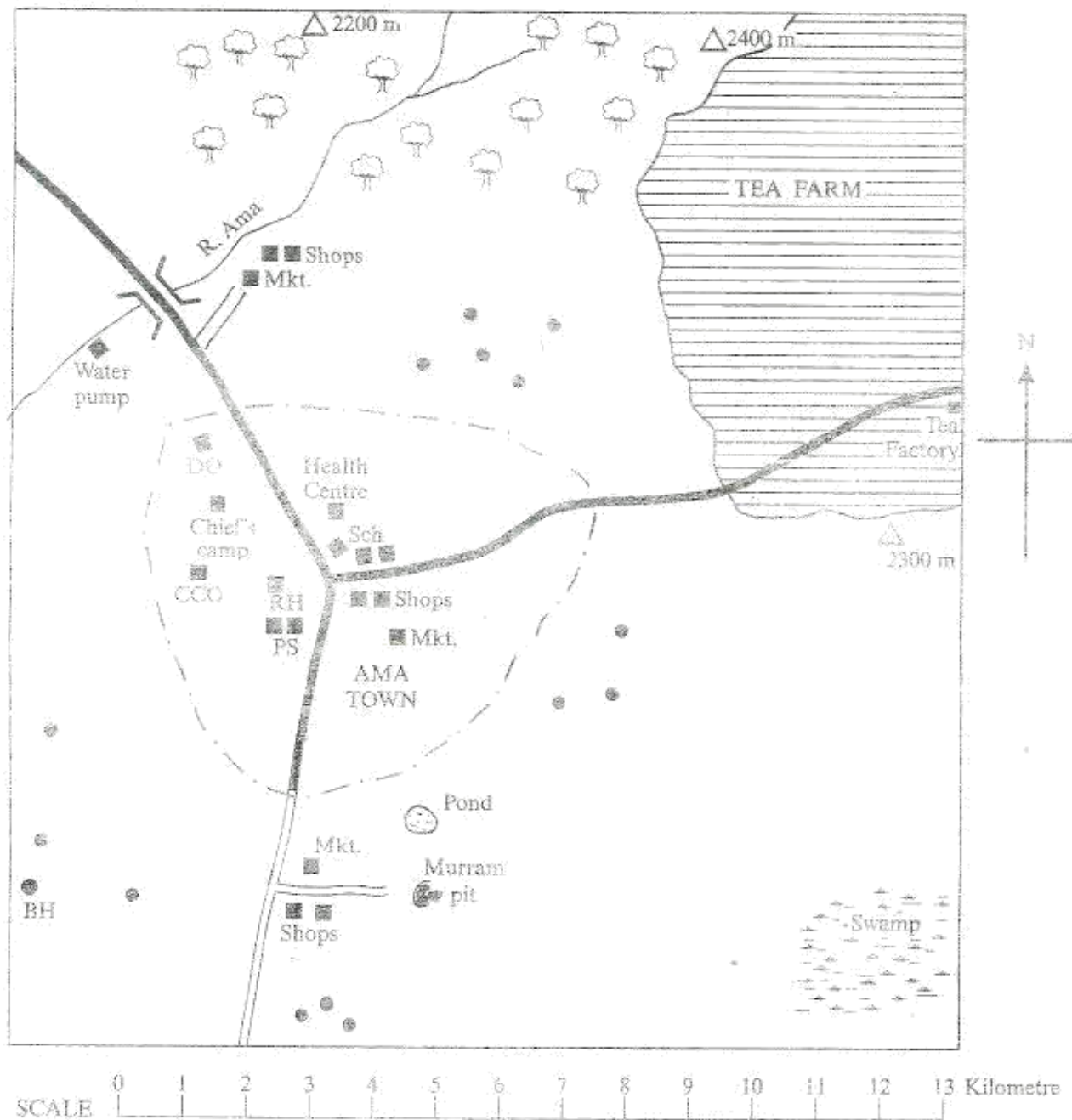
31 (A) (B) (C) (D) 32 (A) (B) (C) (D) 33 (A) (B) (C) (D) 34 (A) (B) (C) (D) 35 (A) (B) (C) (D)

In the set of boxes numbered 33, the box with the letter D printed in it is marked.

11. Your **dark line** **MUST** be within the box.
12. For each question **ONLY ONE** box is to be marked in each set of four boxes.

This Question Paper consists of 12 printed pages.

AMA AREA



KEY

	Permanent buildings	PS	Police station
	Town boundary	DO	District Office
	Tarmac road	Mkt.	Market
	Murrum road	RH	Rest House
	River and Bridge	CCO	County Council Offices
	Tea plantation	BH	Bore Hole
	Forest		
	Hill		
	Swamp		

Study the map of Ama Area and answer questions 1 to 7.

- The general direction of the murram pit from the Chief's Camp is
A. North-East.
B. North-West.
C. South-East.
D. South-West.
- The length of the tarmac road from the junction at Ama town to the tea factory is approximately
A. 7.5 km
B. 8.5 km
C. 10.5 km
D. 11.5 km.
- Which one of the following factors makes the North-Eastern part of Ama Area suitable for tea growing?
A. High altitude.
B. Nearness to Ama town.
C. Presence of forests.
D. Presence of roads.
- Which one of the following Local Authorities administers Ama Area?
A. Municipal Council.
B. County Council.
C. Town Council.
D. Urban Council.
- The main source of water for the residents of Ama town is
A. the swamp
B. the borehole
C. the pond
D. the river.
- Three of the following are economic activities practised in Ama Area. Which one is not?
A. Farming.
B. Fishing.
C. Mining.
D. Trading.
- A person has set fire to the Rest House in Ama town. The **most appropriate** action that the owner should take is to report the incident to
A. the District Officer
B. the Chief's Camp
C. the health centre
D. the police station.
- Which one of the following groups represents a single parent family?
A. Father, daughter, son.
B. Father, mother, son.
C. Father, nephew, daughter
D. Father, daughter, niece.
- Which one of the following is the **main** reason why the Somali migrated into Kenya during the pre-colonial period?
A. For adventure.
B. To look for pasture for their animals.
C. To escape from external attacks.
D. To avoid family conflicts.

- Traditional healers wore special charms in order to
A. display their skills to the customers
B. make themselves look beautiful
C. preserve rare items of the community
D. protect themselves from danger.

- Which one of the following groups of industries consists of service industries?

*Vehicle assembly
Meat canning
Banking*

A.

*Vehicle assembly
Cement making
Oil refining*

B.

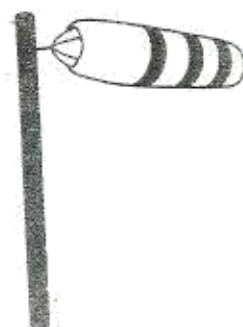
*Meat canning
Sugar refining
Flour milling*

C.

*Banking
Watch repair
Insurance*

D.

- Which one of the following occasions brought people of different ages together in most African communities during the pre-colonial period?
A. Burial ceremonies.
B. Cleansing ceremonies.
C. Marriage ceremonies.
D. Oathing ceremonies.
- The **main** problem that has contributed to the decline in coffee production in Kenya is
A. low payments to farmers
B. lack of domestic market
C. competition from other coffee growing countries
D. scarcity of land for growing the crop.
- The diagram below represents an instrument that is used to measure an element of weather.



Which one of the following elements of weather is measured using the instrument shown in the diagram?

- Air pressure.
 - Temperature.
 - Wind direction.
 - Rainfall.
- Which one of the following was a result of the settlement of the Bantu in the area around Mount Kenya during the pre-colonial period?
A. Formation of Kingdoms in the area.
B. Displacement of the Dorobo from the area.
C. Introduction of cash crop farming in the area.
D. Outbreak of diseases in the area.

16. The government encourages the development of *Jua Kali* industries in Kenya mainly to
- make cheap goods from local raw materials
 - promote trade with other countries
 - enable people to acquire different skills
 - provide an opportunity for people to become self-employed
17. In which one of the following areas in Kenya are mangrove forests found?
- At the foot of mountains
 - In the coastal lowlands
 - In the Lake Victoria basin
 - On the floor of the rift valley

The table below represents rainfall and temperature figures for a station in Africa. Use it to answer question 18.

Month	Jan	Feb	Mar	Apr	May	Jun	Jul	Aug	Sept	Oct	Nov	Dec
Temp in °C	28	28	28	27	27	26	26	27	27	27	27	28
Rainfall in mm	41	69	150	201	206	114	66	84	193	226	150	40

18. Which one of the following statements correctly describes the climate of the station?
- The station is hot and wet throughout the year.
 - The station has one wet season and one dry season.
 - The station is cold throughout the year.
 - The station receives most of the rain at the beginning of the year.
19. Which one of the following activities of the European colonial rulers had a good effect on Africans?
- Marking of boundaries between colonies.
 - Creation of reserves for the Africans.
 - Imposing taxes on Africans.
 - Introduction of western education in the colonies
20. Which one of the following statements is true of age-groups among African communities in Kenya?
- Age-groups were formed when there was war.
 - Age-groups were formed after initiations.
 - Age-groups enabled members to own land.
 - Age-groups were abandoned when Europeans came.
21. Which one of the following Kenyan communities is correctly matched with its place of origin?
- | Community | Place of origin |
|-------------|------------------------|
| A. Luo | — Southern Sudan. |
| B. Marakwet | — Ethiopian Highlands. |
| C. Rendille | — Taita Hills. |
| D. Wadawida | — Mount Elgon. |
22. Who among the following traditional African leaders fought against the establishment of British Colonial rule in Kenya?
- Masaku of the Akamba.
 - Lenana of the Maasai.
 - Mumia of the Abawanga
 - Samoei of the Nandi.

23. Which one of the following countries in Africa was colonised by the French?
- Angola
 - Chad.
 - Tanganyika
 - Gambia

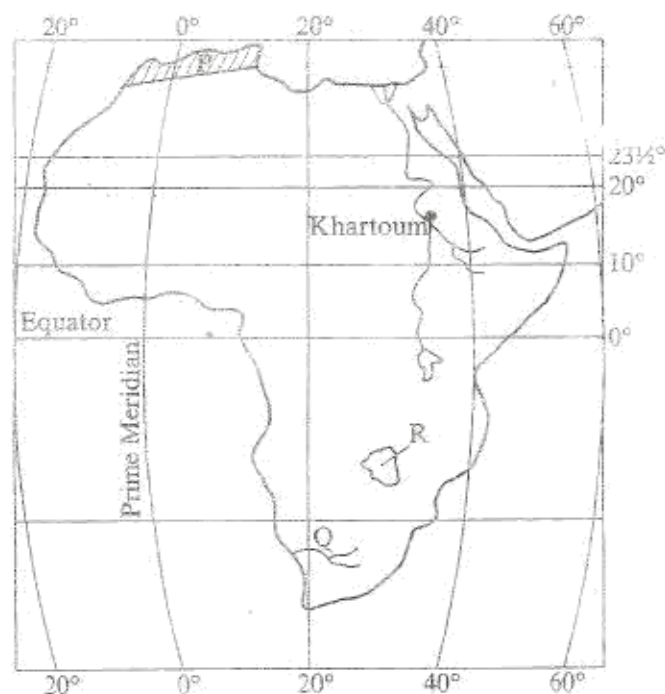
24. Below are factors that influenced the origin of a town in Kenya.
- Availability of clean water
 - Central position along the Uganda railway
 - Existence of flat land

The town whose origin was influenced by the factors listed above is

- Nairobi
- Kisumu
- Eldoret
- Thika.

25. The Almoravids attacked the Kingdom of Old Ghana in order to
- become the rulers of the Kingdom
 - obtain land for settlement
 - control the Trans-Saharan trade
 - assist the Europeans to colonise the area.

Use the map of Africa below to answer questions 26 to 29.



26. The position of Khartoum is
- latitude 16°N and longitude 33°E
 - latitude 16°N and longitude 33°W
 - latitude 10°N and longitude 33°E
 - latitude 20°N and longitude 33°W.
27. Which one of the following types of climate is experienced in the area marked P?
- Desert climate.
 - Tropical climate.
 - Equatorial climate
 - Mediterranean climate.

28. The river marked Q is
A. Cunene
B. Orange
C. Limpopo
D. Zambezi.
29. The traditional kingdom that existed in the area marked R was founded by
A. the Khoi-san
B. the Soninke
C. the Nyamwezi
D. the Shona.
30. The best way of reducing road accidents in Kenya is by
A. building more roads to lessen traffic congestion
B. educating people continuously on how to use roads
C. punishing those who break traffic rules
D. putting up more road signs.
31. The African Communities that resisted European colonisation were defeated **mainly** because
A. the Europeans had superior weapons
B. some Africans assisted the Europeans
C. African leaders were cheated by the Europeans
D. African warriors were poorly trained.
32. The horticultural crops that are grown in Kenya **mainly** for export are
A. bananas and oranges
B. flowers and French beans
C. mangoes and avocados
D. onions and pineapples.
33. Which one of the following was a function of the Kabaka of Buganda during the pre-colonial period?
A. Controlling trade in the Kingdom.
B. Making the budget for the Kingdom.
C. Distributing land for farming.
D. Organising people for communal work.
34. Which one of the following is a reason why the Maasai collaborated with the British during the establishment of colonial rule?
A. They wanted to strengthen their trade links with the British.
B. They wanted to get employment in the settler farms.
C. They wanted the support of the British against their enemies.
D. They wanted to get modern education.
35. Which one of the following statements is **true** about the population of both Kenya and India?
A. It is mainly made up of old people.
B. The rate of population increase is low.
C. Most people live in towns.
D. It is mainly made up of young people.
36. The cheapest method of preserving fish is by
A. freezing
B. salting
C. sun drying
D. deep frying.
37. Which one of the following was a way of treating the sick in the traditional African societies?
A. Drinking porridge.
B. Eating meat.
C. Performing physical exercises.
D. Using herbs.
38. Which one of the following statements is **true** about farming in Kenya during the pre-colonial period?
A. Fertilizer was used in the growing of crops.
B. Most crops were grown for sale.
C. Communities practised shifting cultivation.
D. Most communities grew crops through irrigation.
39. Which one of the following would be the **best** way of controlling rural-urban migration in Kenya?
A. Encouraging setting up of industries in the rural areas.
B. Advising the unemployed people to stay in the rural areas.
C. Providing free food to people in the rural areas.
D. Providing free primary education in the rural areas.
40. The highland areas of Kenya have high population density because
A. there is enough pasture for livestock
B. there is enough space for settlement
C. the climate is warm
D. the soils are fertile.
41. Which one of the following was an effect of the Second World War on African Nationalism in Kenya?
A. It made the Africans stop working in the European farms.
B. It increased the Africans' desire for independence.
C. It led to the Africans being nominated to the Legislative Council.
D. It reduced the Africans' dislike for the Europeans.
42. Which one of the following statements is **true** about trees in the planted forests in Kenya?
A. The trees have thorns.
B. Most of the trees have climbers.
C. Most of the trees mature fast.
D. The trees are of different types.
43. The United Nations Organisation was formed in 1945 **mainly** to
A. promote democracy in the world
B. promote economic cooperation among nations
C. promote Human Rights in all the countries
D. promote peace in the world.
44. The political party which led Ghana to independence in 1957 was
A. the National Liberation Movement (NLM)
B. the Convention Peoples' Party (CPP)
C. the Northern Peoples' Party (NPP)
D. the United Gold Coast Convention (UGCC).

45. Below are statements about the achievement of an African head of state.

- He introduced collective farming in his country.*
- He participated in the formation of the OAU.*
- He introduced free education up to University in his country.*

The head of state described above is

- Jomo Kenyatta
- Haile Sellasie
- Julius Nyerere
- Kwame Nkrumah

46. Three of the following statements are true about the Commonwealth. Which one is not?

- It promotes uniform education systems in member states.
- Most of its members are former British colonies.
- It has its headquarters in London.
- It is headed by the Queen of England.

47. The main benefit of tourism to Kenya is that it

- encourages the development of industries in the country.
- earns the country foreign exchange.
- encourages conservation of the environment.
- provides employment opportunities.

48. Which one of the following is a reason why maize is widely grown in Kenya and Tanzania?

- It is cheap to produce.
- It is exported to earn foreign exchange.
- It is grown to feed animals.
- It is the staple food for the people.

49. Which one of the following is a benefit of agricultural cooperative societies to the members in Kenya?

- Providing labour in the farms.
- Licensing farmers to start businesses.
- Marketing the farm produce.
- Settling the farmers who are landless.

50. Below are statements about a mineral in Kenya.

- It is white in appearance.*
- It is mined on the floor of the rift valley.*
- It is used as a water filter.*

The mineral described above is

- diatomite
- fluorspar
- limestone
- soda ash

51. In Kenya, 12th December 1964 is remembered as the day when the country became

- independent from United Kingdom.
- a member of the East African Community.
- a republic.
- a state.

52. Which one of the following African countries is correctly matched with its first president?

Country President

- Zimbabwe — Robert Mugabe.
- Tanzania — Benjamin Mkapa.
- Mozambique — Joaquim Chissano.
- Somalia — Mohamed Abdullahi Yusuf.

53. In Kenya, laws are made by

- the High Court
- the Judicial Service Commission
- the National Assembly
- the Public Service Commission

54. One parliamentary duty of the president of Kenya is to

- appoint the Speaker of the National Assembly.
- open parliamentary sessions.
- chair parliamentary meetings.
- swear in the members of parliament.

55. Which one of the following countries is a member of the Common Market for Eastern and Southern Africa (COMESA)?

- Chad.
- Ethiopia.
- Libya.
- Nigeria.

56. Policemen on patrol rescue suspected thieves from mob justice in order to

- get evidence of the crime from them.
- help them to escape.
- punish them for the crime.
- take them to prison.

57. The main source of revenue for the Government of Kenya is

- finances
- grants
- loans
- taxes.

58. Three of the following are national philosophies in Kenya. Which one is not?

- African Socialism
- Harambee
- Pan Africanism
- Nyayoism.

59. Nomination of members of parliament in Kenya is done by

- the Attorney-General
- the constituency development committees
- the Electoral Commission
- the political parties.

60. Which one of the following is a national symbol of Kenya?

- the Maasai
- the Shamba
- the Shamba
- the Shamba

PART II RELIGIOUS EDUCATION

SECTION A: CHRISTIAN RELIGIOUS EDUCATION

61. Adam and Eve are the greatest in God's creation because they
- were the last to be created
 - named the animals
 - were made in His likeness
 - took care of the garden of Eden.
62. Who among the following people was commanded by God to build an ark?
- Noah.
 - Laban.
 - Isaac.
 - Joshua.
63. Which one of the following promises was made by God to Abraham during his call? He was promised that he would
- become a priest
 - be blessed
 - rule forever
 - have a strong kingdom.
64. God said "I am who I am" (Exodus 3:14). These words were spoken to Moses when he was
- crossing the Red Sea
 - given the Ten Commandments
 - looking after his father-in-law's sheep
 - performing miracles in Egypt.
65. The main lesson the Israelites learnt about God when He gave them manna during the Exodus is that He is
- everlasting
 - humble
 - holy
 - caring.
66. Moses poured blood on the Israelites during the Covenant at Mount Sinai because he wanted them to
- be loyal to God
 - defeat their enemies
 - go to Canaan
 - forget about Egypt.
67. Who among the following people was a judge in Israel?
- Ruth.
 - Hannah.
 - Deborah.
 - Zipporah.
68. Who among the following kings of Israel was a musician?
- Saul.
 - David.
 - Ahaz.
 - Jeroboam.
69. The prophet who showed faith in God at Mount Carmel is
- Hosea
 - Elisha
 - Amos
 - Elijah.
70. Which one of the following reasons best explains why angel Gabriel announced that Mary's son was to be holy? He was to
- be great
 - rule forever
 - be conceived by the Holy Spirit
 - be born in Bethlehem.
71. King Herod wanted to know the place baby Jesus was born in order to go and
- kill him
 - worship him
 - offer him gifts
 - meet his parents.
72. Which one of the following statements is a teaching of Jesus from the sermon on the Mount?
- Let the children come to me.
 - Love your enemies and pray for them.
 - You must be born of water and spirit.
 - Sell your property and have riches in heaven.
73. The Pharisees and the Scribes condemned Jesus for healing on the Sabbath because they thought that
- he was breaking the law
 - he was the son of a carpenter
 - the sick were sinners.
 - he was seeking popularity.
74. Which one of the following parables of Jesus teaches about prayer? The parable of the
- prodigal son
 - great banquet
 - mustard seed
 - friend at midnight.
75. After Jesus healed the ten lepers, the one who went back to thank him was a
- Jew
 - Cananite
 - Samaritan
 - Syrian.
76. Jesus asked his disciples to pray at the Mount of Olives because he wanted them to
- stay awake
 - avoid falling into temptations
 - save him from his enemies
 - go with him to Pilate.
77. Who among the following people prepared the body of Jesus for burial?
- Joseph of Arimathea.
 - Symon of Cyrene.
 - Cleopas.
 - Andrew.

78. "Unless I see the scars of the nails in his hands, and put my finger on those scars and my hand in his side, I will not believe." (John 20:25) When did Thomas speak these words?
- When Jesus was on the cross.
 - During the miraculous catch of fish.
 - During the journey to Emmaus.
 - When the disciples told him they had seen the risen Lord.
79. Paul the apostle advises Christians to obey those in authority because
- they are powerful
 - their rule is perfect
 - they are chosen by God
 - they are well to do.
80. Which one of the following beliefs about God is found in both Christianity and traditional African religion?
- God lives in mountains.
 - God is all powerful.
 - God speaks through ancestors.
 - God has a son.
81. Which one of the following acts was performed by Priests during worship in traditional African communities?
- Making sacrifices.
 - Baptising people.
 - Confirming people.
 - Giving Holy Communion.
82. In traditional African communities, initiation ceremonies were held to show that the
- community enjoyed leisure
 - community was wealthy
 - New Year had begun
 - young had become adults.
83. The living dead in traditional African communities were **mainly** remembered through
- holding dancing ceremonies
 - composing songs for them
 - pouring libation
 - lighting fire.
84. Which one of the following rituals was performed when a baby was born in traditional African communities?
- Paying dowry.
 - Tattooing the body.
 - Shaving the hair.
 - Baptising the baby.
85. Peninah visits the sick and gives them food. The fruit of the Holy Spirit she demonstrates is
- patience
 - kindness
 - joy
 - peace.

86. Kelvin, your deskmate has lost your pencil. As a Christian you should
- demand payment
 - report him to the teacher
 - report him to your parents
 - forgive him.
87. Mary is a rich lady who has poor neighbours. As a Christian, the **best** advice to give her is that she should
- give jobs to the needy
 - move to a well to do area
 - donate her money to the church
 - keep her money in a safe place.
88. Margaret, a standard Eight pupil finds out that her classmate is taking alcohol. What is the **best** action for her to take?
- Tell the other members of the class.
 - Advise the classmate to see a counsellor.
 - Report the matter to the nearest police station.
 - Avoid talking to the classmate.
89. Timothy, your deskmate tells you that he hates doing homework. As a Christian, what advice would you give him? Tell him to
- copy from his friends
 - move to another class
 - ask his parents to do it for him
 - take his duties seriously.
90. Which one of the following activities did Johann Ludwig Krapf involve himself in as a missionary in Kenya?
- Building railway stations.
 - Appointing local chiefs.
 - Building mission stations.
 - Planting cash crops.

SECTION B: ISLAMIC RELIGIOUS EDUCATION

61. Which one of the following quotations is a verse from *Surah Al-Fatihah*?
- "Say He is Allah the One."
 - "And turn your attention to the Lord."
 - "Guide us to the straight path."
 - "He taught man that which he knew not."
62. Which one of the following is a teaching of *Surah Alaq*?
- Muslims should seek knowledge.
 - Muslims should avoid hoarding of goods.
 - Muslims should devote themselves to prayer.
 - Muslims should eat what is lawful.
63. What punishment did Allah promise Abu Lahab and his wife according to the Holy Qur'an?
- They would be eaten by wild animals.
 - They would burn in a blazing fire.
 - They would be stung by scorpions.
 - They would be swallowed by a big fish.

64. In which Surah of the Qur'an does Allah remind the Prophet (P.B.U.H.) about his orphanhood?

- A. *Al-Asr*.
- B. *Al-Fil*.
- C. *Ad-Dhara*.
- D. *Al-Maun*.

65. In which Surah of the Qur'an have Muslims been told to pray and offer sacrifice?

- A. *Al-Tin*.
- B. *An-Nasr*.
- C. *Al-Ikhlâs*.
- D. *Al-Kauthar*.

66. Which one of the following statements is **not** true about *Hadith*?

- A. They tell what the Prophet's companions did.
- B. They tell what the Prophet (P.B.U.H.) said.
- C. They help in the understanding of the Qur'an.
- D. They are a source of Muslim law.

67. Three of the following are the names of the *Kaaba*. Which one is **not**?

- A. *Bait-ul-Attiq*.
- B. *Bait-ul-Haram*.
- C. *Bait-ul-Maqdis*.
- D. *Bait-Allah*.

68. Which one of the following statements is **not** true about *Laila-tul-Qadr*?

- A. It is a night of peace.
- B. It is a night when people will be judged.
- C. It is a night full of blessings.
- D. It is a night better than one thousand months.

69. The five daily prayers were given to Prophet Muhammad (P.B.U.H.) during

- A. *Hijratul Wid'a*
- B. his journey to Taif
- C. his migration to Madina
- D. *Isra-wal-Miraj*.

70. The Prophet's birthday is celebrated in the month of

- A. *Rajab*
- B. *Shaaban*
- C. *Rabi-ul-Awwal*
- D. *Shawwal*.

71. Who among the following Prophets understood the language of birds, ants and other animals?

- A. Sulaiman (A.S.)
- B. Yunus (A.S.)
- C. Ayyub (A.S.)
- D. Yusuf (A.S.)

72. Which among the following angels will draw the spirit of the one who has died?

- A. *Jibril*
- B. *Mikail*
- C. *Israfel*
- D. *Malik*

73. Which book is correctly matched with the Prophet to whom it was revealed?

Book	Prophet
A. <i>Zabur</i>	Daud
B. <i>Taurat</i>	Issa
C. <i>Injil</i>	Ibrahim
D. <i>Suhuf</i>	Musa

74. Which one of the following rituals performed during *Hajj* is **not** *fardh*?

- A. Stoning of the *Jamaarat*.
- B. Going round the *Kaaba*.
- C. Running between *Safar* and *Marwa*.
- D. Visiting the Prophet's grave.

75. Which one of the following boxes contains the five pillars of Islam in their correct order?

<i>Salat</i>
<i>Saum</i>
<i>Shahada</i>
<i>Hajj</i>
<i>Zakat</i>

A.

<i>Saum</i>
<i>Shahada</i>
<i>Zakat</i>
<i>Salat</i>
<i>Hajj</i>

B.

<i>Shahada</i>
<i>Salat</i>
<i>Zakat</i>
<i>Saum</i>
<i>Hajj</i>

C.

<i>Zakat</i>
<i>Shahada</i>
<i>Saum</i>
<i>Hajj</i>
<i>Salat</i>

D.

76. Yaqub, an only child, died and left Kshs. 90,000 to be inherited by his father and mother. How much money will Yaqub's mother get according to *Sharia*?

- A. Kshs. 45,000.
- B. Kshs. 30,000.
- C. Kshs. 60,000.
- D. Kshs. 15,000.

77. When are *Qabliya* prayers performed?

- A. Before a *fardh* prayer.
- B. After a *fardh* prayer.
- C. In the middle of the night.
- D. Before midday.

78. Which one of the following festivals is celebrated on the 1st of *Shawwal*?

- A. *Miraj*.
- B. *Milad-un-Nabi*.
- C. *Idul-Adha*.
- D. *Idul-Fitr*.

79. Which one of the following is the correct order of the Hajj rituals performed in *Mecca*?

- A. *Tawaf*, *Sa'i*, *Sayim*, *Hajj*, *Salat*
- B. *Sa'i*, *Tawaf*, *Sayim*, *Hajj*, *Salat*
- C. *Wudu*, *Tawaf*, *Sa'i*, *Hajj*, *Salat*
- D. *Tawaf*, *Sa'i*, *Sayim*, *Hajj*, *Salat*

80. Which one of the following business practices is forbidden in Islam?

- A. Making profit.
- B. Charging interest.
- C. Selling goods on credit.
- D. Giving loans.

81. Which one of the following is a condition for an Islamic marriage to take place?

- A. There must be witnesses during *Nikah* ceremony.
- B. *Nikah* ceremony must take place in a mosque.
- C. The bride and bridegroom must be presented with gifts.
- D. The bridegroom must pay dowry to the bride's parents.

82. Abdul, a standard six pupil, realises that he forgot to do his Mathematics homework a few minutes before the teacher comes to class. The right course of action for Abdul to take is to

- A. run home and to the homework
- B. leave the class until the Mathematics lesson is over
- C. quickly copy the homework from another pupil
- D. apologise to the teacher and promise to do the homework.

83. Which one of the following events took place during *Ghazat Badr*?

- A. The Prophet (P.B.U.H.) made peace between the Aws and the Khazraj.
- B. The call of *Azhan* was introduced.
- C. The migration of the last group to the *Yathrib*.
- D. Muhammad (P.B.U.H.) was declared Allah's messenger.

84. In which country did the Prophet (P.B.U.H.) receive the revelation to accept Islam by the Qur'an?

- A. Egypt
- B. India
- C. Abyssinia
- D. Syria

85. Which one of the following events marked the beginning of Muslim era, from which dates were recorded?

- A. The birth of the Prophet
- B. *Hijra*
- C. The death of the Prophet
- D. *Bara'at al-Nabi*

86. In the year of migration to Madina, the Prophet was accompanied by

- A. Salman
- B. Ali
- C. Abu Bakr
- D. Umar

87. In which year did the Prophet (P.B.U.H.) migrate to Madina?

- A. 610
- B. 611
- C. 612
- D. 613

88. Which one of the following was not an action taken by the Prophet (P.B.U.H.) after the conquest of Makkah?

- A. He destroyed the idols in the Kaaba.
- B. He expelled the pagans from Makkah.
- C. He worshipped in the Kaaba.
- D. He forgave his enemies.

89. Hassan who is a cattle farmer adds water to milk before selling it to his customers. This practice is known as

- A. *Israf*
- B. *Shirk*
- C. *Riba*
- D. *Ghash*

90. Which one of the following steps of *Salat* is not correctly matched with the recitation that goes with it?

Step of <i>salat</i>	Recitation
A. <i>Ruk'at</i>	<i>Sabihana Rabbi al-adhim</i>
B. <i>Qiyam</i>	<i>Al-hamdu lillahi hamidun hamidun</i>
C. <i>Ruk'at</i>	<i>Takbir Akbar</i>
D. <i>Sajda</i>	<i>Sabihana Rabbi al-ala</i>

SECTION C: HINDU RELIGIOUS EDUCATION

91. Which one of the following holy books states that the *Upanishads* of the Veda is supreme?

- A. *Upanishads*
- B. *Shruti*
- C. *Smriti*
- D. *Itihas*

92. Which is respected among the

- A. *Shruti*
- B. *Smriti*
- C. *Itihas*
- D. *Upanishads*

93. In his fifth incarnation Lord Vishnu punished King Bali because the King was

- A. ambitious
- B. proud
- C. cruel
- D. selfish

94. Which one of the following is not a part of the *Upanishads*?

- A. *Upanishads*
- B. *Shruti*
- C. *Smriti*
- D. *Itihas*

95. Which one of the following is not a part of the *Upanishads*?

- A. *Upanishads*
- B. *Shruti*
- C. *Smriti*
- D. *Itihas*

66. Which one of the following objects held by Lord Vishnu signifies purity?

- A. Kamal
- B. Gada
- C. Chakra
- D. Shanka

67. By narrating the Gita on the battlefield of Kurukshetra, Krishna showed his *Virat Swarup* to

- A. Yudhishtir
- B. Sahadev
- C. Arjun
- D. Bhishma

68. The element of Pancha Mahabhoot that enables a person to enjoy the fragrance of flowers is

- A. Prithvi
- B. Vayu
- C. Jal
- D. Akash

69. Who among the following deities is worshipped on Ekadashi day?

- A. Brahma
- B. Ganesh
- C. Mahesh
- D. Vishnu

70. After sitting for the Kenya Certificate of Primary Education examination, Rahul donated his primary text books to needy pupils. He put into practice the principle of

- A. Akrodh
- B. Anekantiwad
- C. Aparigraha
- D. Asteya

71. By planting new trees and taking care of the existing ones, Hindus practice the principle of

- A. Purushartha
- B. Pranidaya
- C. Dhee
- D. Daan

72. Paresh and Ramesh who are in form one had a heated argument. As a result, Paresh raised his hand to hit Ramesh. Ramesh caught Paresh's hand and told him to calm down. The main quality demonstrated by Ramesh's action is

- A. Dama
- B. Ahimsa
- C. Dhriti
- D. Kshama

73. How many beads are there in a Hindu Japmala?

- A. 108
- B. 100
- C. 808
- D. 20

74. The following rituals are performed during the Sikh baptism ceremony.

- (i) *Panj Pware* explain the principles of Sikhism.
- (ii) Candidates who are to be baptised sit in front of the *Guru Granth Sahib*.
- (iii) *Amrit* is given to the candidates.
- (iv) *Mool Mantra* is recited.
- (v) *Karah Prasad* is distributed.

In what order are the above rituals performed?

- A. (i) (ii) (iv) (iii) (v).
- B. (iii) (ii) (v) (i) (iv).
- C. (iv) (iii) (ii) (i) (v).
- D. (ii) (i) (iv) (iii) (v).

75. Which one of the following prayers is recited at bed time?

- A. *Ardas*.
- B. *Japji Sahib*.
- C. *Kirtan Sohila*.
- D. *Rehras*.

76. The three threads of *yajnopavit* worn by a *banik* represent

- A. harmony, independence, obedience
- B. knowledge, action, devotion
- C. penance, salvation, abstinence
- D. charity, purity, responsibility

77. Which one of the following is a reason why Buddhists offer incense?

- A. To pay respect to Buddha.
- B. To remember the teachings of Buddha.
- C. To purify the air.
- D. To achieve peace of mind.

78. Which one of the following *Sanskar* is performed to prepare students for *Brahmacharya Ashram*?

- A. *Annaprashana*.
- B. *Chudakarma*.
- C. *Jatkarma*.
- D. *Upanayana*.

79. Which one of the following *yajna* is performed in the month of *Bhadrapad*?

- A. *Atithi*.
- B. *Bhoot*.
- C. *Pitra*.
- D. *Dev*.

80. The crescent with a dot in the Jain Swastika symbolises

- A. *Chandra Lok*
- B. *Siddha Sthan*
- C. *Sivarga*
- D. *Akash*

81. The festival during which the three consorts of *Temura* are worshipped is

- A. *Navratri*
- B. *Satnavadi*
- C. *Poo*
- D. *Chh*

82. Which one of the following is a reason why Sikhs celebrate *Vaisaki*?
- To mark the birth of Guru Arjan Dev.
 - To mark the installation of *Adi Granth*.
 - To welcome the spring season.
 - To thank Parmatma for good harvest.

83. The teaching of Yamaraj to Nachiketa that *Atma* is unborn, eternal and everlasting is based on
- Raja Yoga*
 - Bhakti Yoga*
 - Jnana Yoga*
 - Karma Yoga*

84. The following are lines of the *Gayatri Mantra*:
- Tatsa Viturva Ranyam.*
 - Om Bhur Bhuvah Swaha.*
 - Dhiyoyo Napracho Dayat.*
 - Bhargo Devasya Dhimahi.*

Which one of the following is the correct order of reciting the *mantra*?

- (iii) (ii) (iv) (i).
 - (ii) (iii) (i) (iv).
 - (ii) (i) (v) (iii).
 - (iv) (i) (iii) (ii).
85. Which one of the following *Tirthakshetra* is dedicated to Lord Shiva?
- Badrinath.
 - Rameshwar.
 - Dwarka.
 - Gaya.
86. In what way did Vibhishan help Rama to win the war against Ravan?
- He provided Rama's army with weapons.
 - He persuaded Kumbhakarna to join Rama.
 - He revealed to Hanuman the fighting tactics of Ravan.
 - He revealed to Rama the secret of how to kill Ravan.
87. Who among the following *Tirthankar* emphasised that *Sharir* is perishable?
- Mallinath.
 - Neminath.
 - Parshvanath.
 - Shantinath.
88. In order to unite people of different faiths, Adi Shankaracharya established
- dispensaries
 - chardham*
 - dharmashala*
 - schools.
89. Who among the following *Tirthankar* is correctly matched with his emblem?

Tirthankar	Emblem
A. Ajitnath	tortoise.
B. Munisuvrat	snake.
C. Parshvanath	elephant
D. Mahavir	lion.

90. Kajal borrowed Nisha's science note book. Unfortunately the book got lost. The **best** action for Kajal to take is to
- inform the class teacher of the loss of the book
 - pray for the recovery of the book
 - help Nisha to rewrite the notes in a new book
 - give Nisha money to buy a new note book